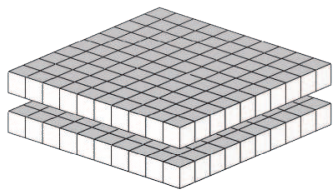
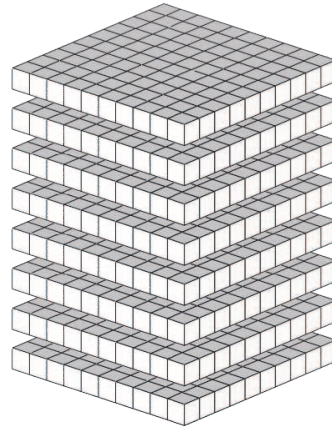


# Base Ten Blocks—Counting Flats (B)

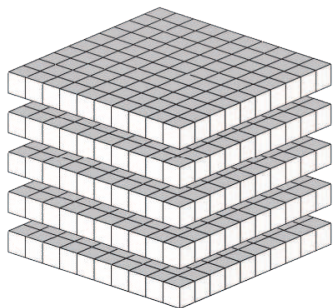
**Instructions:** The value of each flat is 100. What is the value of each set of flats?




The value of the flats is \_\_\_\_\_.



The value of the flats is \_\_\_\_\_.



The value of the flats is \_\_\_\_\_.



The value of the flats is \_\_\_\_\_.