
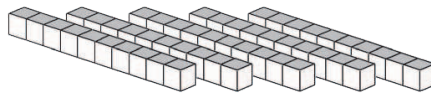


Base Ten Blocks—Counting Rods (A)

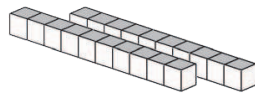
Instructions: The value of each rod is 10. What is the value of each set of rods?




The value of the rods is _____.



The value of the rods is _____.



The value of the rods is _____.



The value of the rods is _____.