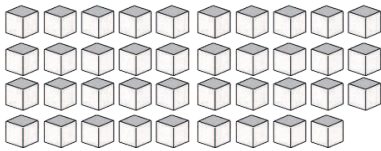
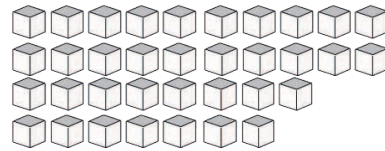


Base Ten Blocks—Counting Units (E)

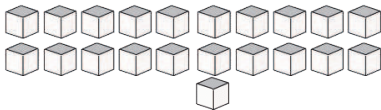
Instructions: Count how many units are in each group below.



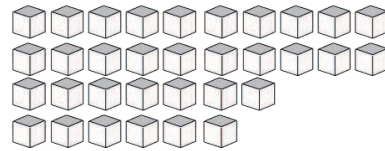
There are _____ units
in this group.



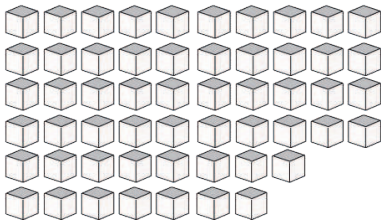
There are _____ units
in this group.



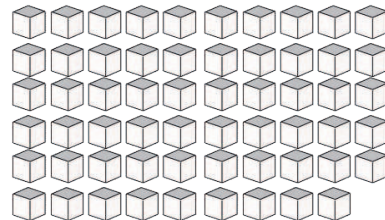
There are _____ units
in this group.



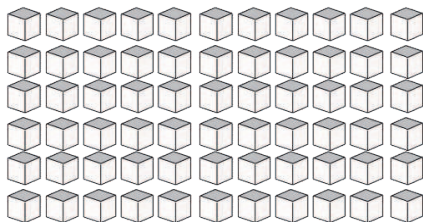
There are _____ units
in this group.



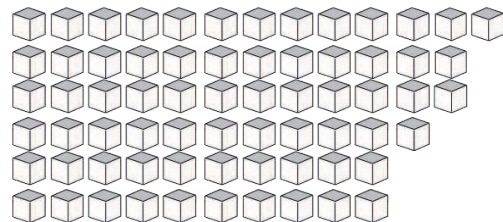
There are _____ units
in this group.



There are _____ units
in this group.



There are _____ units
in this group.



There are _____ units
in this group.