


# Modeling Fifths (C)


Instructions: Write the correct numerator.




$$\frac{5}{5}$$




$$\frac{\quad}{5}$$



$$\frac{\quad}{5}$$




$$\frac{\quad}{5}$$



$$\frac{\quad}{5}$$




$$\frac{\quad}{5}$$



$$\frac{\quad}{5}$$




$$\frac{\quad}{5}$$



$$\frac{\quad}{5}$$

# Modeling Fifths (C) Answers


Instructions: Write the correct numerator.




$$\frac{5}{5}$$




$$\frac{2}{5}$$




$$\frac{3}{5}$$




$$\frac{5}{5}$$



$$\frac{3}{5}$$




$$\frac{5}{5}$$



$$\frac{4}{5}$$



$$\frac{3}{5}$$



$$\frac{1}{5}$$