



Modeling Fifths (E)


Instructions: Write the correct numerator.



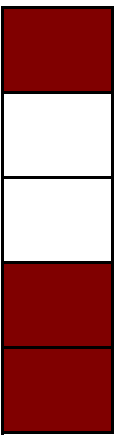
$$\frac{3}{5}$$




$$\frac{\quad}{5}$$



$$\frac{\quad}{5}$$




$$\frac{\quad}{5}$$




$$\frac{\quad}{5}$$




$$\frac{\quad}{5}$$



$$\frac{\quad}{5}$$




$$\frac{\quad}{5}$$




$$\frac{\quad}{5}$$

Modeling Fifths (E) Answers


Instructions: Write the correct numerator.



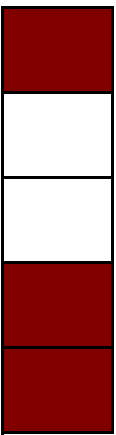
$$\frac{3}{5}$$




$$\frac{2}{5}$$



$$\frac{2}{5}$$




$$\frac{3}{5}$$




$$\frac{5}{5}$$




$$\frac{4}{5}$$



$$\frac{3}{5}$$



$$\frac{3}{5}$$



$$\frac{3}{5}$$