


# Modeling Fifths (A)


Instructions: Write the correct numerator.



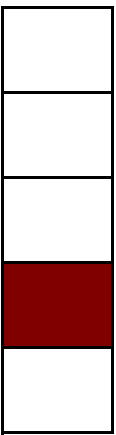
$$\frac{2}{5}$$



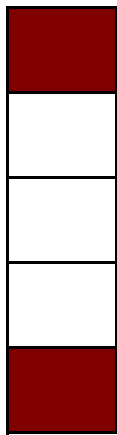
$$\frac{5}{5}$$



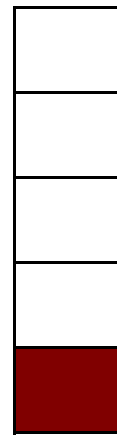
$$\frac{3}{5}$$




$$\frac{1}{5}$$




$$\frac{2}{5}$$




$$\frac{1}{5}$$



$$\frac{5}{5}$$




$$\frac{5}{5}$$




$$\frac{3}{5}$$

# Modeling Fifths (A) Answers


Instructions: Write the correct numerator.



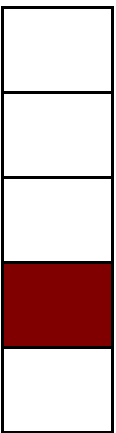
$$\frac{2}{5}$$




$$\frac{5}{5}$$



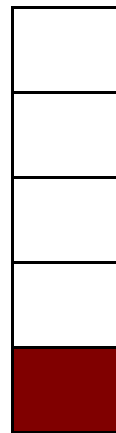
$$\frac{2}{5}$$




$$\frac{1}{5}$$




$$\frac{2}{5}$$




$$\frac{1}{5}$$



$$\frac{5}{5}$$




$$\frac{5}{5}$$




$$\frac{4}{5}$$

# Modeling Fifths (B)


Instructions: Write the correct numerator.



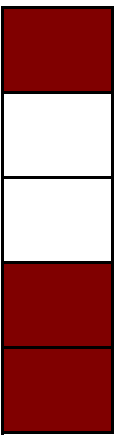
$$\frac{5}{5}$$



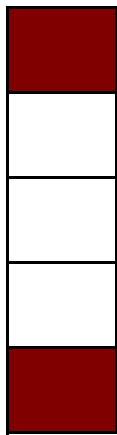
$$\frac{\quad}{5}$$



$$\frac{\quad}{5}$$




$$\frac{\quad}{5}$$




$$\frac{\quad}{5}$$




$$\frac{\quad}{5}$$



$$\frac{\quad}{5}$$




$$\frac{\quad}{5}$$




$$\frac{\quad}{5}$$

# Modeling Fifths (B) Answers


Instructions: Write the correct numerator.



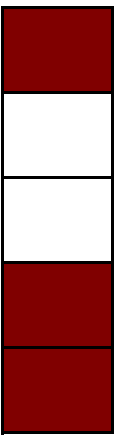
$$\frac{5}{5}$$



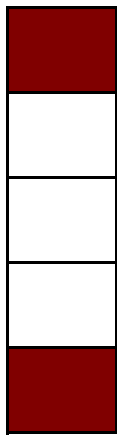
$$\frac{5}{5}$$



$$\frac{3}{5}$$




$$\frac{2}{5}$$




$$\frac{1}{5}$$




$$\frac{4}{5}$$



$$\frac{4}{5}$$




$$\frac{1}{5}$$



$$\frac{4}{5}$$

# Modeling Fifths (C)


Instructions: Write the correct numerator.




$$\frac{5}{5}$$




$$\frac{\quad}{5}$$



$$\frac{\quad}{5}$$




$$\frac{\quad}{5}$$




$$\frac{\quad}{5}$$




$$\frac{\quad}{5}$$



$$\frac{\quad}{5}$$




$$\frac{\quad}{5}$$




$$\frac{\quad}{5}$$

# Modeling Fifths (C) Answers


Instructions: Write the correct numerator.




$$\frac{5}{5}$$




$$\frac{2}{5}$$



$$\frac{3}{5}$$




$$\frac{5}{5}$$




$$\frac{3}{5}$$




$$\frac{5}{5}$$



$$\frac{4}{5}$$




$$\frac{3}{5}$$



$$\frac{1}{5}$$

# Modeling Fifths (D)


Instructions: Write the correct numerator.




$$\frac{3}{5}$$



$$\frac{\quad}{5}$$



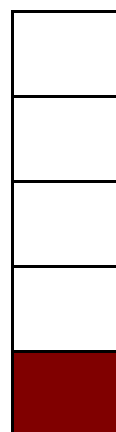
$$\frac{\quad}{5}$$




$$\frac{\quad}{5}$$



$$\frac{\quad}{5}$$




$$\frac{\quad}{5}$$



$$\frac{\quad}{5}$$




$$\frac{\quad}{5}$$



$$\frac{\quad}{5}$$

# Modeling Fifths (D) Answers


Instructions: Write the correct numerator.



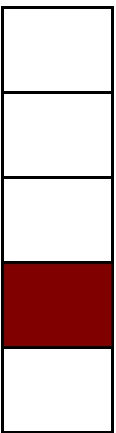
$$\frac{3}{5}$$



$$\frac{3}{5}$$




$$\frac{4}{5}$$




$$\frac{1}{5}$$



$$\frac{5}{5}$$




$$\frac{1}{5}$$



$$\frac{5}{5}$$




$$\frac{3}{5}$$



$$\frac{3}{5}$$

# Modeling Fifths (E)


Instructions: Write the correct numerator.



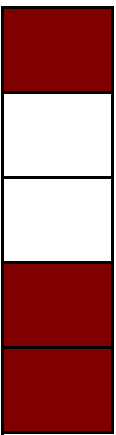
$$\frac{3}{5}$$




$$\frac{\quad}{5}$$



$$\frac{\quad}{5}$$




$$\frac{\quad}{5}$$




$$\frac{\quad}{5}$$




$$\frac{\quad}{5}$$



$$\frac{\quad}{5}$$




$$\frac{\quad}{5}$$



$$\frac{\quad}{5}$$

# Modeling Fifths (E) Answers


Instructions: Write the correct numerator.



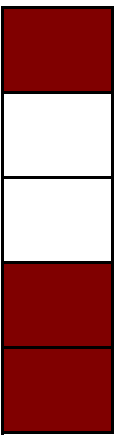
$$\frac{3}{5}$$



$$\frac{2}{5}$$




$$\frac{2}{5}$$




$$\frac{3}{5}$$



$$\frac{5}{5}$$




$$\frac{4}{5}$$



$$\frac{3}{5}$$



$$\frac{3}{5}$$



$$\frac{3}{5}$$