


Modeling Halves (A)




In this model,
there are two
parts. One part is
shaded

$\frac{1}{2}$ part shaded
 $\frac{1}{2}$ parts

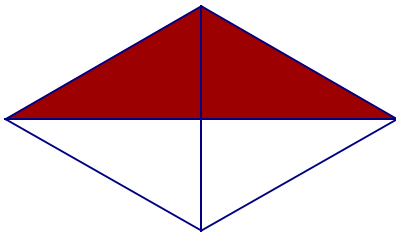
For each model, write a fraction that describes it.




—




—




—



—




—



—


Modeling Halves (A) Answers




In this model,
there are two
parts. One part is
shaded

$\frac{1}{2}$ part shaded
 $\frac{1}{2}$ parts

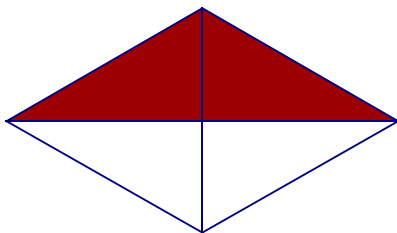
For each model, write a fraction that describes it.




$\frac{1}{2}$




$\frac{0}{2}$




$\frac{1}{2}$



$\frac{1}{2}$



$\frac{2}{2}$



$\frac{1}{2}$