



Modeling Sixths (C)


Instructions: Write the correct numerator.




$$\frac{2}{6}$$



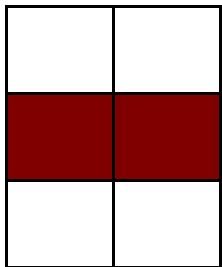
$$\frac{6}{6}$$



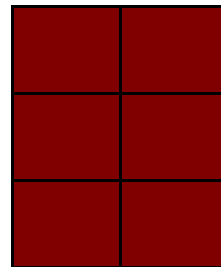
$$\frac{2}{6}$$




$$\frac{2}{6}$$




$$\frac{2}{6}$$



$$\frac{6}{6}$$




$$\frac{5}{6}$$




$$\frac{3}{6}$$

Modeling Sixths (C) Answers


Instructions: Write the correct numerator.




$$\frac{2}{6}$$



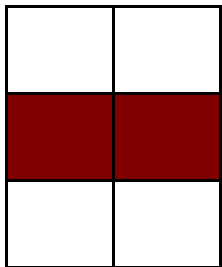
$$\frac{6}{6}$$




$$\frac{2}{6}$$




$$\frac{3}{6}$$




$$\frac{4}{6}$$



$$\frac{6}{6}$$



$$\frac{5}{6}$$



$$\frac{3}{6}$$