
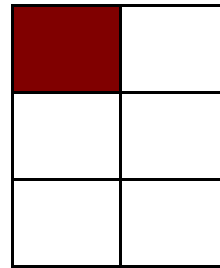


Modeling Sixths (D)


Instructions: Write the correct numerator.



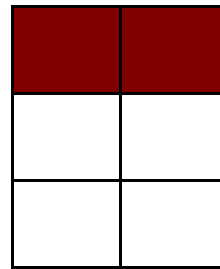
$$\frac{2}{6}$$




$$\frac{\quad}{6}$$



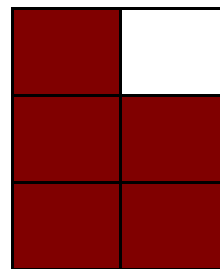
$$\frac{\quad}{6}$$




$$\frac{\quad}{6}$$




$$\frac{\quad}{6}$$



$$\frac{\quad}{6}$$



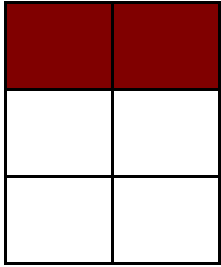
$$\frac{\quad}{6}$$



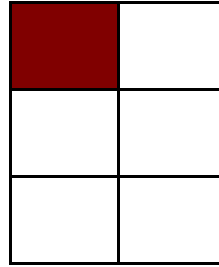
$$\frac{\quad}{6}$$

Modeling Sixths (D) Answers


Instructions: Write the correct numerator.



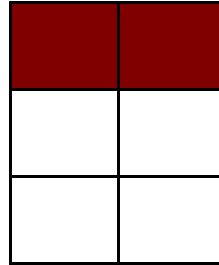
$$\frac{2}{6}$$




$$\frac{1}{6}$$




$$\frac{6}{6}$$




$$\frac{2}{6}$$




$$\frac{3}{6}$$



$$\frac{5}{6}$$



$$\frac{5}{6}$$



$$\frac{5}{6}$$