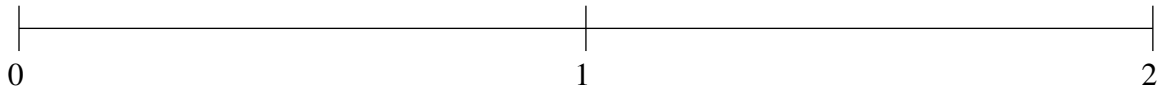


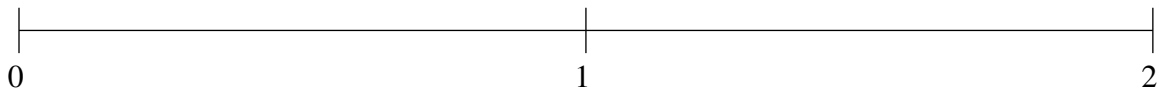
## Ordering Fractions (H)

Order each set of fractions using the number line.

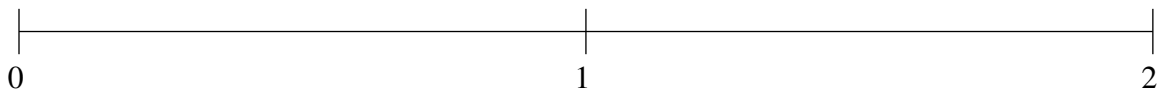
$$\frac{1}{6}, 1\frac{1}{4}, 1\frac{2}{3}, \frac{5}{6}, \frac{2}{5}$$



$$\frac{1}{4}, 1\frac{6}{7}, 1\frac{1}{2}, 1\frac{1}{9}, \frac{1}{2}$$



$$\frac{1}{5}, 1\frac{1}{2}, 1\frac{7}{8}, 1\frac{1}{9}, \frac{5}{9}$$



## Ordering Fractions (H) Answers

Order each set of fractions using the number line.

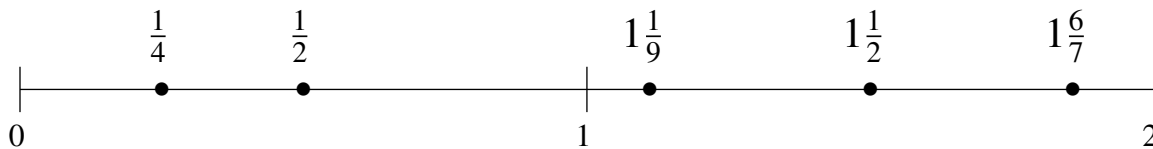
$$\frac{1}{6}, 1\frac{1}{4}, 1\frac{2}{3}, \frac{5}{6}, \frac{2}{5}$$

$$\frac{1}{6}, \frac{2}{5}, \frac{5}{6}, 1\frac{1}{4}, 1\frac{2}{3}$$



$$\frac{1}{4}, 1\frac{6}{7}, 1\frac{1}{2}, 1\frac{1}{9}, \frac{1}{2}$$

$$\frac{1}{4}, \frac{1}{2}, 1\frac{1}{9}, 1\frac{1}{2}, 1\frac{6}{7}$$



$$\frac{1}{5}, 1\frac{1}{2}, 1\frac{7}{8}, 1\frac{1}{9}, \frac{5}{9}$$

$$\frac{1}{5}, \frac{5}{9}, 1\frac{1}{9}, 1\frac{1}{2}, 1\frac{7}{8}$$

