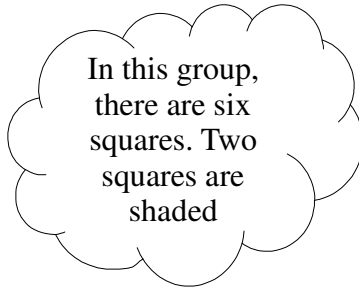


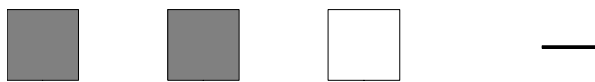
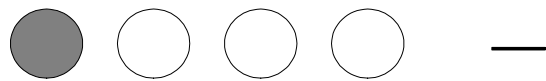
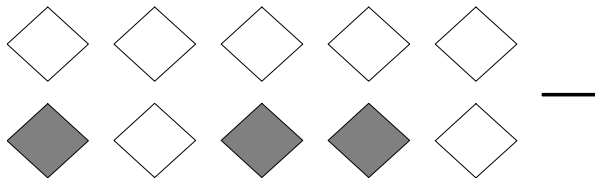
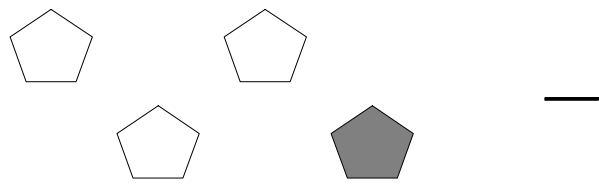

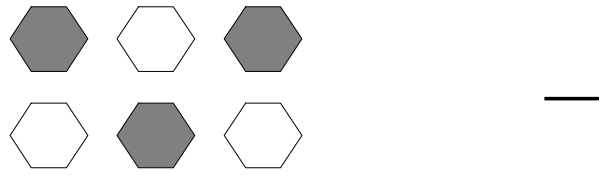
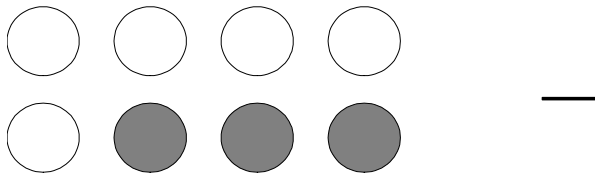


Parts of a Group (A)




$\frac{2}{6}$ squares shaded
6 squares in group

For each group, tell how many shapes are shaded.



Jenny colored five of the triangles in a group of seven triangles.
What fraction could she write? _____

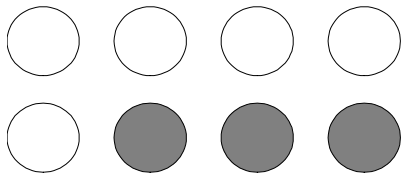
Parts of a Group (A) Answers



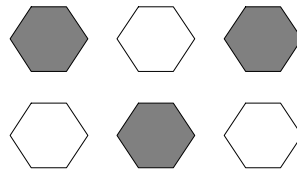
In this group, there are six squares. Two squares are shaded

$\frac{2}{6}$ squares shaded
6 squares in group


For each group, tell how many shapes are shaded.



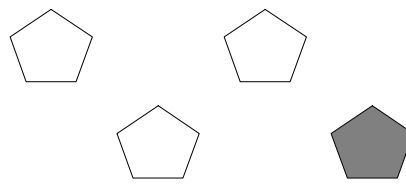
$\frac{3}{8}$



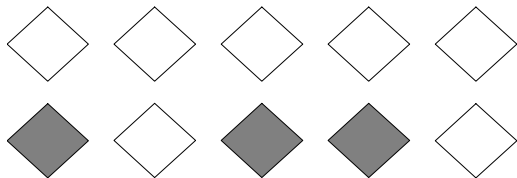
$\frac{3}{6}$



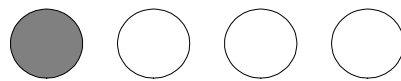
$\frac{4}{8}$




$\frac{1}{4}$




$\frac{3}{10}$



$\frac{1}{4}$



$\frac{2}{3}$



$\frac{0}{8}$

Jenny colored five of the triangles in a group of seven triangles.
What fraction could she write?

$\frac{5}{7}$