


# Parts of a Group (D)



In this group,  
there are six  
squares. Two  
squares are  
shaded


$\frac{2}{6}$  squares shaded  
6 squares in group

For each group, tell how many shapes are shaded.

<p style="text-align: right;">—</p>	<p style="text-align: right;">—</p>
<p style="text-align: right;">—</p>	<p style="text-align: right;">—</p>
<p style="text-align: right;">—</p>	<p style="text-align: right;">—</p>
<p style="text-align: right;">—</p>	<p style="text-align: right;">—</p>

Kelly colored two of the diamonds in a group of three diamonds.  
What fraction could she write? \_\_\_\_\_

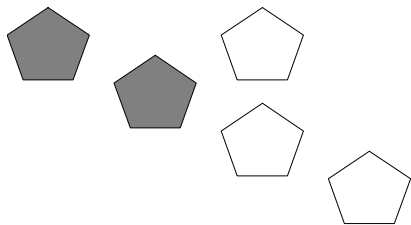
# Parts of a Group (D) Answers




In this group, there are six squares. Two squares are shaded

$\frac{2}{6}$  squares shaded  
6 squares in group

For each group, tell how many shapes are shaded.



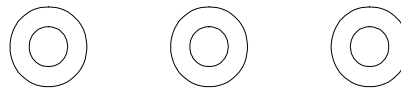
$\frac{2}{5}$



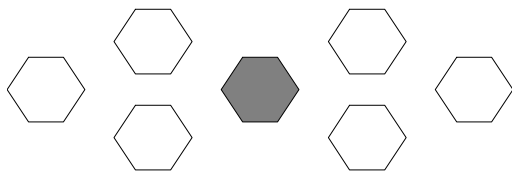
$\frac{4}{6}$



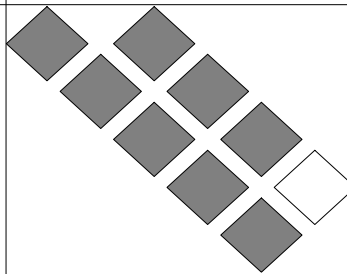
$\frac{1}{2}$



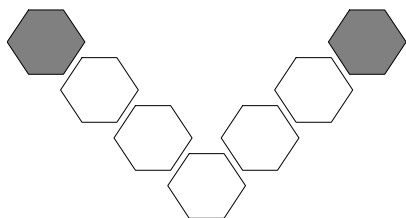
$\frac{0}{3}$



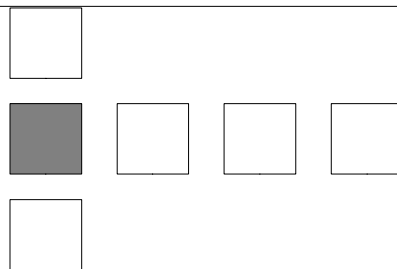
$\frac{1}{7}$



$\frac{8}{9}$



$\frac{2}{7}$



$\frac{1}{6}$

Kelly colored two of the diamonds in a group of three diamonds.  
What fraction could she write?

$\frac{2}{3}$