



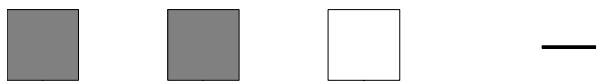
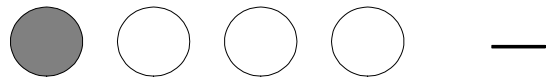
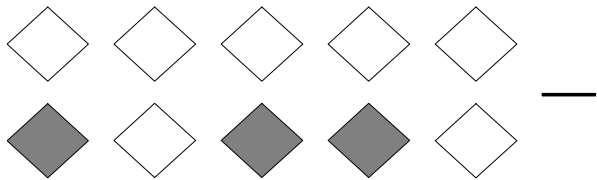
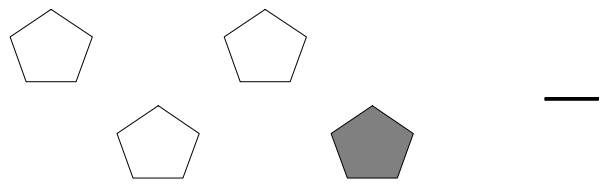

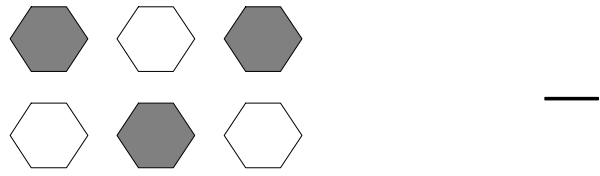
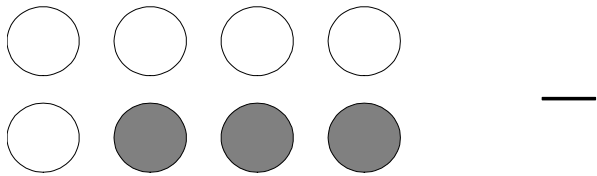
Parts of a Group (A)



In this group,
there are six
squares. Two
squares are
shaded


$\frac{2}{6}$ squares shaded
6 squares in group

For each group, tell how many shapes are shaded.



Jenny colored five of the triangles in a group of seven triangles.
What fraction could she write? _____

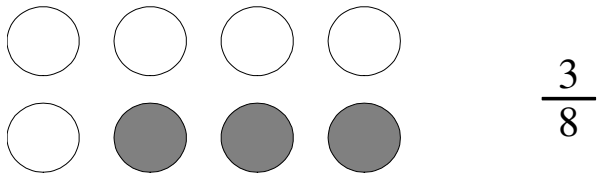
Parts of a Group (A) Answers



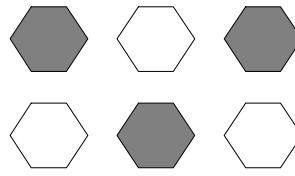
In this group, there are six squares. Two squares are shaded

$\frac{2}{6}$ squares shaded
squares in group


For each group, tell how many shapes are shaded.



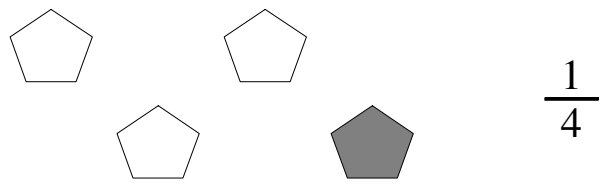
$\frac{3}{8}$



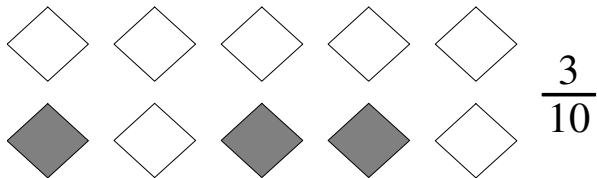
$\frac{3}{6}$



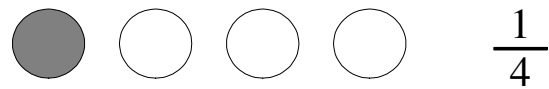
$\frac{4}{8}$



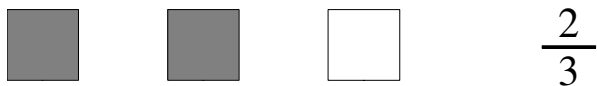
$\frac{1}{4}$




$\frac{3}{10}$



$\frac{1}{4}$



$\frac{2}{3}$




$\frac{0}{8}$

Jenny colored five of the triangles in a group of seven triangles.
What fraction could she write?

$\frac{5}{7}$


Parts of a Group (B)



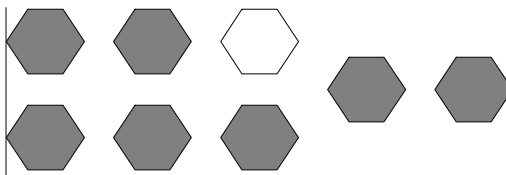
In this group, there are six squares. Two squares are shaded

$\frac{2}{6}$ squares shaded
6 squares in group

For each group, tell how many shapes are shaded.



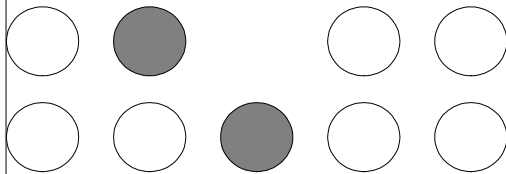
—




—



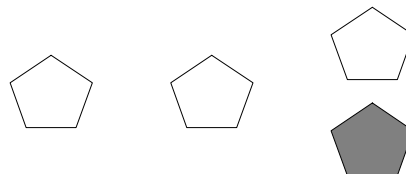
—



—



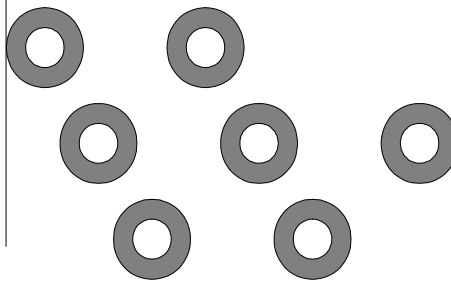
—



—




—



—

David colored two of the squares in a group of five squares. What fraction could he write? _____


Parts of a Group (B) Answers



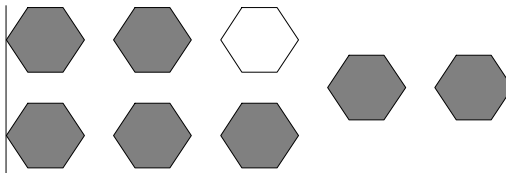
In this group, there are six squares. Two squares are shaded

$\frac{2}{6}$ squares shaded
6 squares in group

For each group, tell how many shapes are shaded.



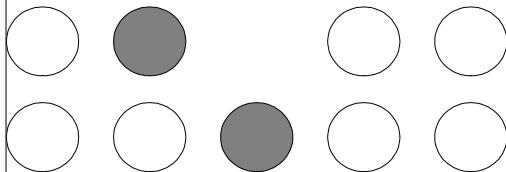
$\frac{1}{7}$




$\frac{7}{8}$



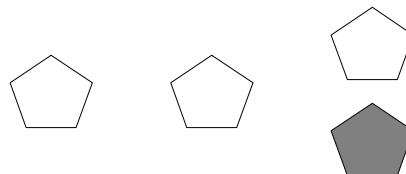
$\frac{1}{2}$



$\frac{2}{9}$



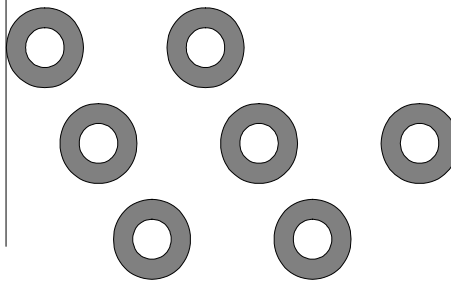
$\frac{2}{5}$



$\frac{1}{4}$



$\frac{2}{7}$




$\frac{7}{7}$

David colored two of the squares in a group of five squares. What fraction could he write?

$\frac{2}{5}$

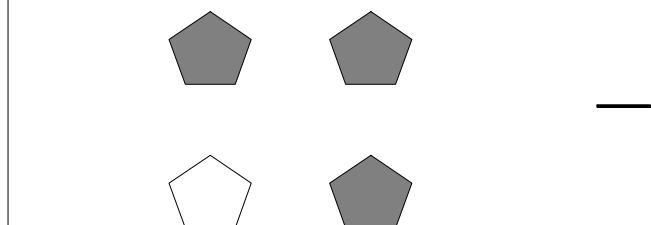

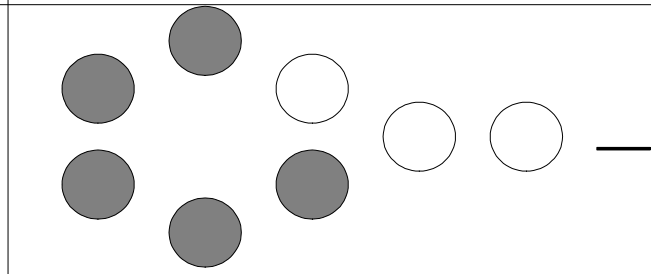
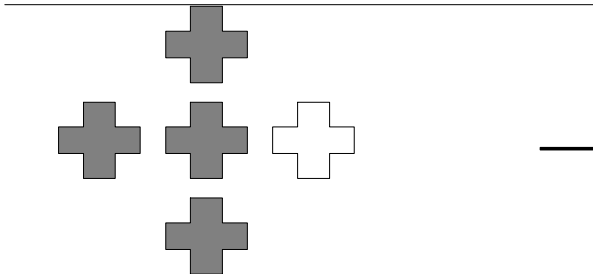
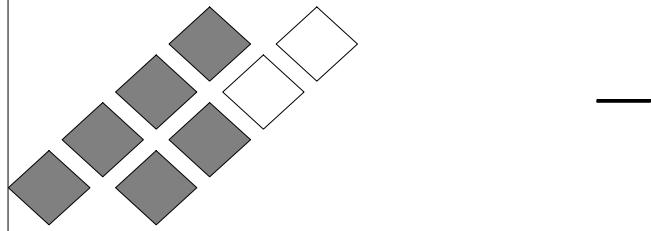
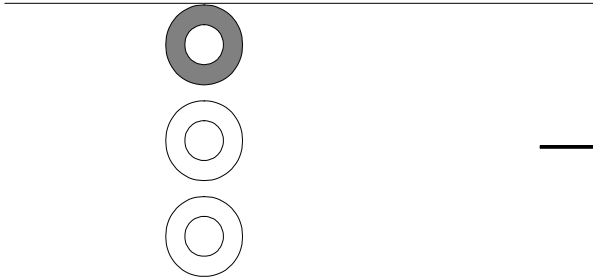
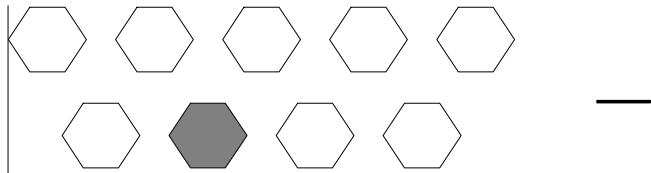

Parts of a Group (C)



In this group,
there are six
squares. Two
squares are
shaded


$\frac{2}{6}$ squares shaded
6 squares in group

For each group, tell how many shapes are shaded.



Norman colored six of the circles in a group of eight circles. What fraction could he write? _____


Parts of a Group (C) Answers



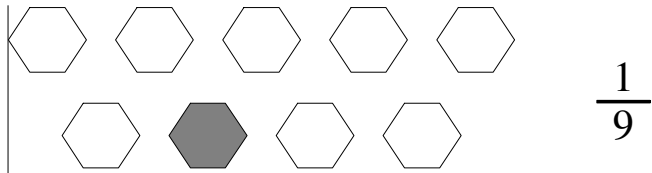
In this group, there are six squares. Two squares are shaded

$\frac{2}{6}$ squares shaded
6 squares in group

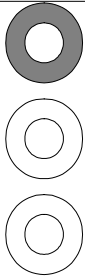
For each group, tell how many shapes are shaded.



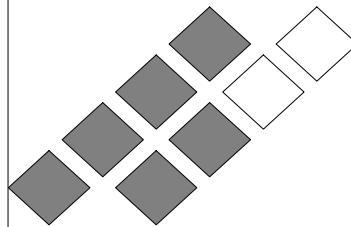
$\frac{0}{4}$



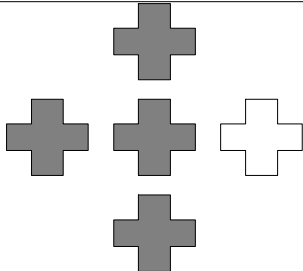
$\frac{1}{9}$



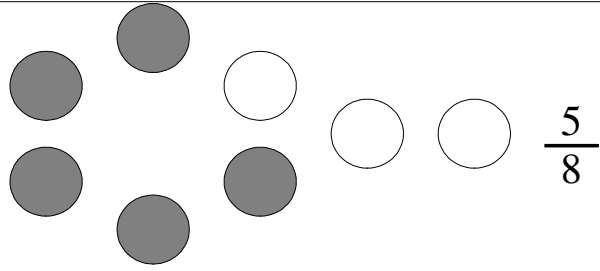
$\frac{1}{3}$




$\frac{6}{8}$



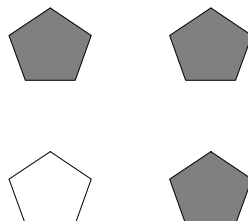
$\frac{4}{5}$



$\frac{5}{8}$



$\frac{7}{8}$




$\frac{3}{4}$

Norman colored six of the circles in a group of eight circles. What fraction could he write?

$\frac{6}{8}$

Parts of a Group (D)



In this group,
there are six
squares. Two
squares are
shaded


$\frac{2}{6}$ squares shaded
6 squares in group

For each group, tell how many shapes are shaded.

<p>—</p>	<p>—</p>
<p>—</p>	<p>—</p>
<p>—</p>	<p>—</p>
<p>—</p>	<p>—</p>

Kelly colored two of the diamonds in a group of three diamonds.
What fraction could she write? _____

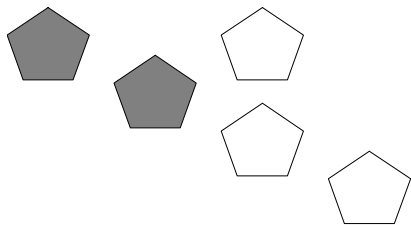
Parts of a Group (D) Answers




In this group, there are six squares. Two squares are shaded

$\frac{2}{6}$ squares shaded
6 squares in group

For each group, tell how many shapes are shaded.



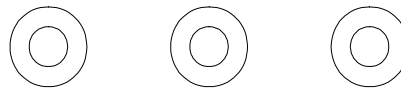
$\frac{2}{5}$



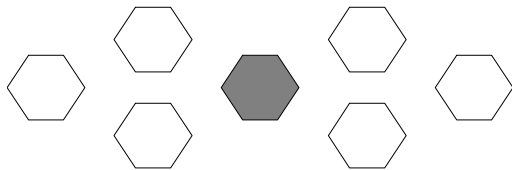
$\frac{4}{6}$



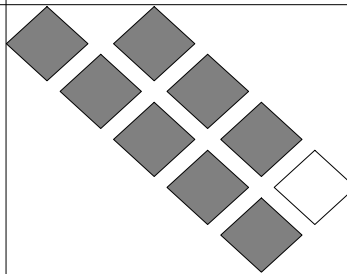
$\frac{1}{2}$



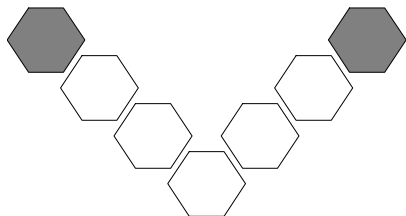
$\frac{0}{3}$



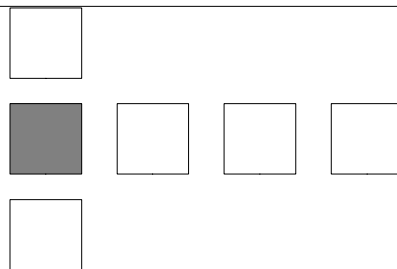
$\frac{1}{7}$



$\frac{8}{9}$



$\frac{2}{7}$




$\frac{1}{6}$

Kelly colored two of the diamonds in a group of three diamonds.
What fraction could she write?

$\frac{2}{3}$

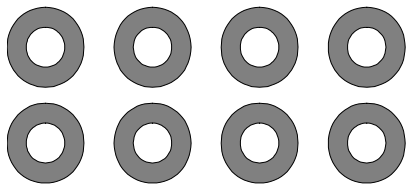
Parts of a Group (E)



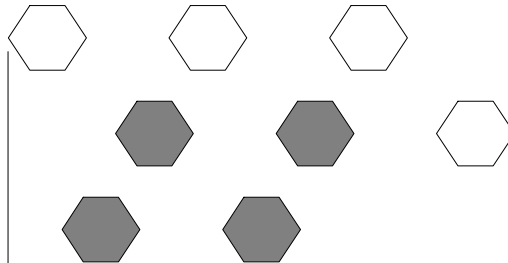
In this group,
there are six
squares. Two
squares are
shaded

$\frac{2}{6}$ squares shaded
6 squares in group


For each group, tell how many shapes are shaded.



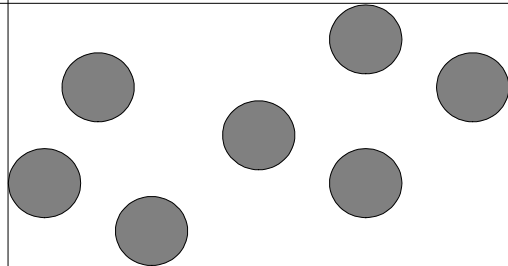
—



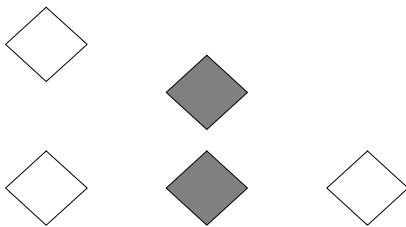
—




—




—



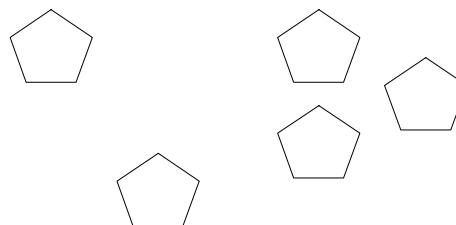
—



—




—



—

Thomas broke his crayon and colored none of the six crosses. What fraction could he write? —

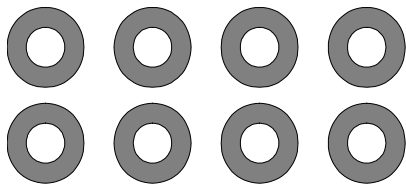
Parts of a Group (E) Answers



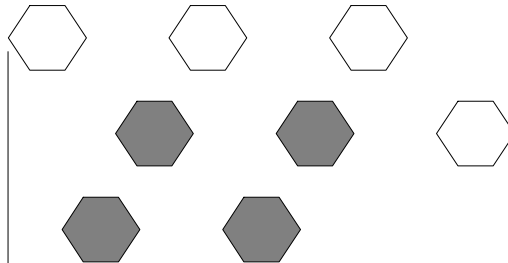
In this group, there are six squares. Two squares are shaded

$\frac{2}{6}$ squares shaded
squares in group


For each group, tell how many shapes are shaded.



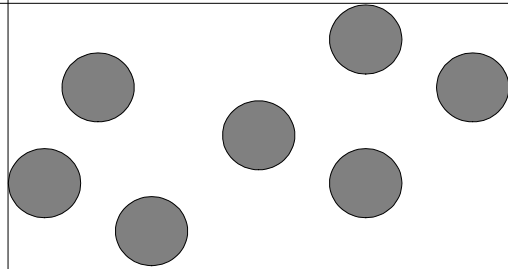
$\frac{8}{8}$



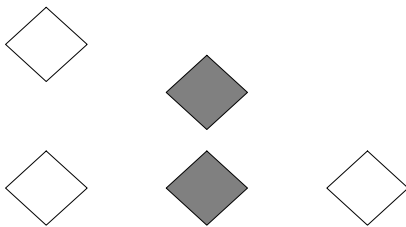
$\frac{4}{8}$




$\frac{1}{4}$




$\frac{7}{7}$



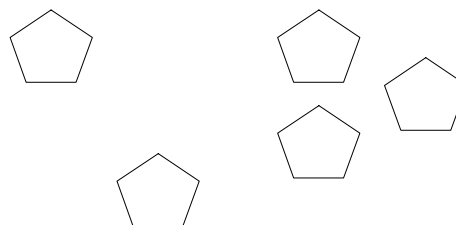
$\frac{2}{5}$



$\frac{4}{5}$



$\frac{6}{9}$



$\frac{0}{5}$

Thomas broke his crayon and colored none of the six crosses. What fraction could he write?

$\frac{0}{6}$