


Autumn Ratios (A)

Find each ratio and simplify, if necessary.




$$\text{leaf} : (\text{leaf} + \text{oak leaf}) = \quad : \quad = \quad :$$

$$\text{oak leaf} : (\text{oak leaf} + \text{leaf}) = \quad : \quad = \quad :$$




$$\text{tree} : (\text{tree} + \text{leaf}) = \quad : \quad = \quad :$$

$$\text{leaf} : (\text{leaf} + \text{tree}) = \quad : \quad = \quad :$$



$$\text{yellow leaf} : \text{oak leaf} = \quad : \quad = \quad :$$

$$\text{oak leaf} : \text{yellow leaf} = \quad : \quad = \quad :$$



$$\text{oak leaf} : (\text{oak leaf} + \text{yellow leaf}) = \quad : \quad = \quad :$$

$$\text{yellow leaf} : (\text{yellow leaf} + \text{oak leaf}) = \quad : \quad = \quad :$$