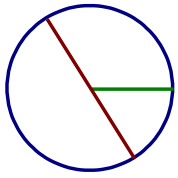
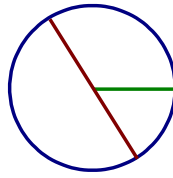

Circumference and Area of Circles (J)

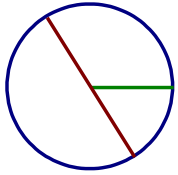
Find the circumference and area of each circle to one decimal place.



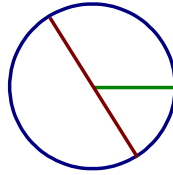
$r = 5.2 \text{ in}$



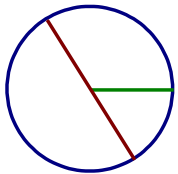
$r = 7.3 \text{ yd}$



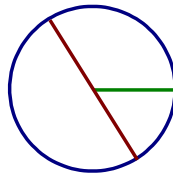
$r = 8.8 \text{ mi}$



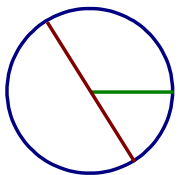
$d = 2.6 \text{ mm}$



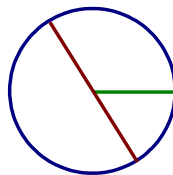
$r = 2.4 \text{ m}$



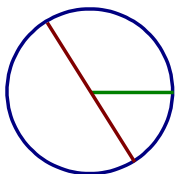
$d = 9.2 \text{ mm}$



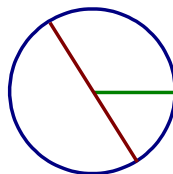
$d = 0.5 \text{ mm}$



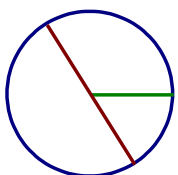
$d = 4.4 \text{ m}$



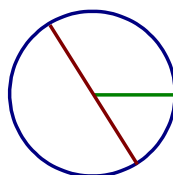
$r = 9.2 \text{ cm}$



$d = 9.9 \text{ cm}$



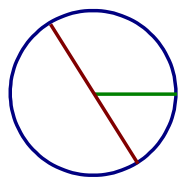
$r = 7.5 \text{ in}$



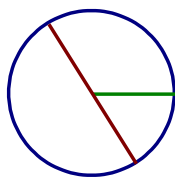
$d = 6.9 \text{ mi}$

Circumference and Area of Circles (J) Answers

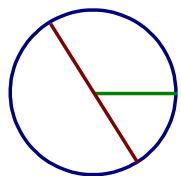
Find the circumference and area of each circle to one decimal place.



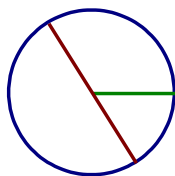
$$\begin{aligned}r &= 5.2 \text{ in} \\C &= 32.7 \text{ in} \\A &= 84.9 \text{ sq. in}\end{aligned}$$



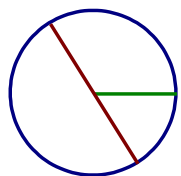
$$\begin{aligned}r &= 7.3 \text{ yd} \\C &= 45.9 \text{ yd} \\A &= 167.4 \text{ sq. yd}\end{aligned}$$



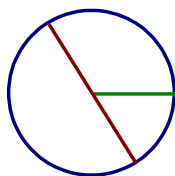
$$\begin{aligned}r &= 8.8 \text{ mi} \\C &= 55.3 \text{ mi} \\A &= 243.3 \text{ sq. mi}\end{aligned}$$



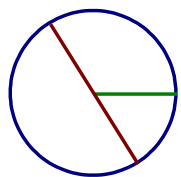
$$\begin{aligned}d &= 2.6 \text{ mm} \\C &= 8.2 \text{ mm} \\A &= 5.3 \text{ sq. mm}\end{aligned}$$



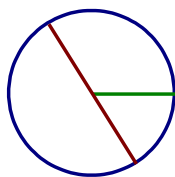
$$\begin{aligned}r &= 2.4 \text{ m} \\C &= 15.1 \text{ m} \\A &= 18.1 \text{ sq. m}\end{aligned}$$



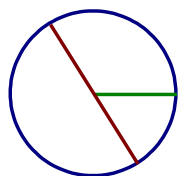
$$\begin{aligned}d &= 9.2 \text{ mm} \\C &= 28.9 \text{ mm} \\A &= 66.5 \text{ sq. mm}\end{aligned}$$



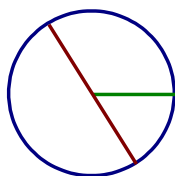
$$\begin{aligned}d &= 0.5 \text{ mm} \\C &= 1.6 \text{ mm} \\A &= 0.2 \text{ sq. mm}\end{aligned}$$



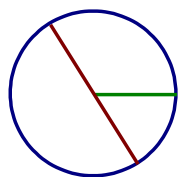
$$\begin{aligned}d &= 4.4 \text{ m} \\C &= 13.8 \text{ m} \\A &= 15.2 \text{ sq. m}\end{aligned}$$



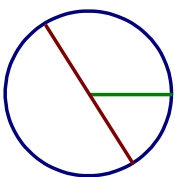
$$\begin{aligned}r &= 9.2 \text{ cm} \\C &= 57.8 \text{ cm} \\A &= 265.9 \text{ sq. cm}\end{aligned}$$



$$\begin{aligned}d &= 9.9 \text{ cm} \\C &= 31.1 \text{ cm} \\A &= 77 \text{ sq. cm}\end{aligned}$$



$$\begin{aligned}r &= 7.5 \text{ in} \\C &= 47.1 \text{ in} \\A &= 176.7 \text{ sq. in}\end{aligned}$$



$$\begin{aligned}d &= 6.9 \text{ mi} \\C &= 21.7 \text{ mi} \\A &= 37.4 \text{ sq. mi}\end{aligned}$$