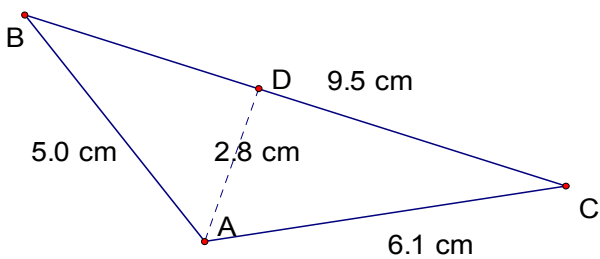
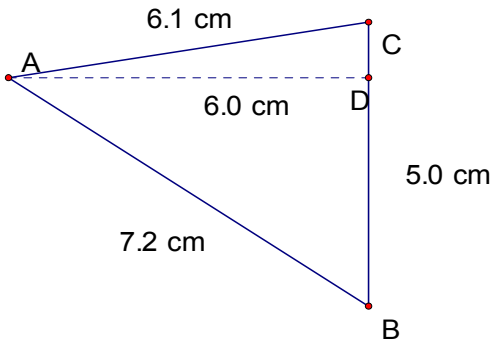
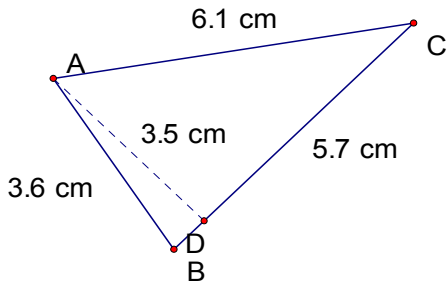
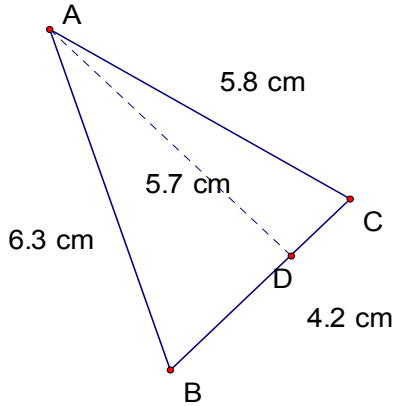


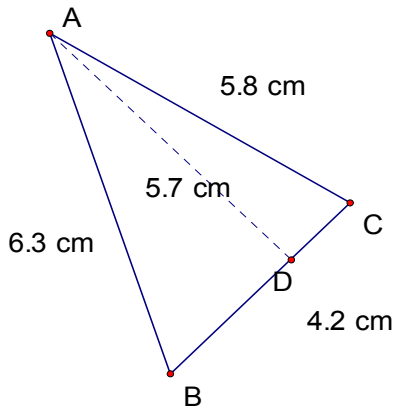
# Perimeter and Area of Triangles (C)

Instructions: Calculate the perimeter and area for each triangle below.



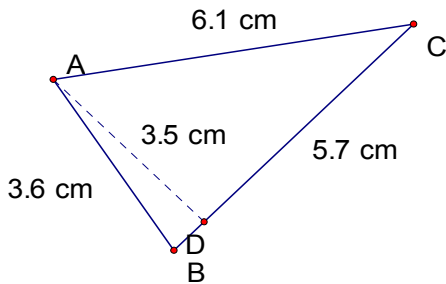
# Perimeter and Area of Triangles (C) Answers

Instructions: Calculate the perimeter and area for each triangle below.



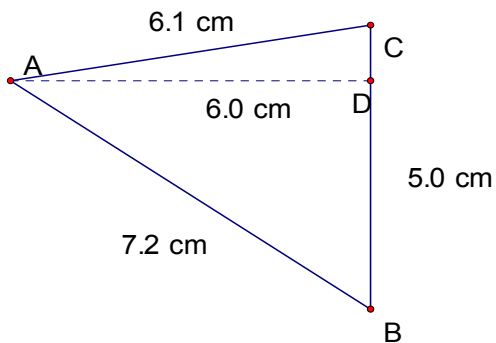
$$\text{Perimeter} = 16.3 \text{ cm}$$

$$\text{Area} = 11.97 \text{ cm}^2$$



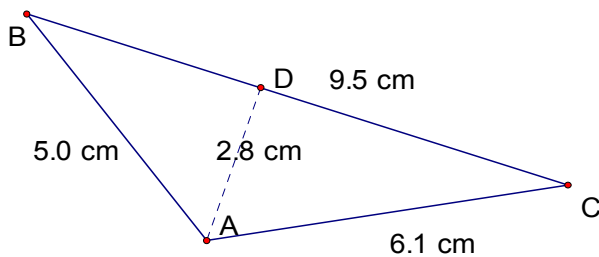
$$\text{Perimeter} = 15.4 \text{ cm}$$

$$\text{Area} = 9.975 \text{ cm}^2$$



$$\text{Perimeter} = 18.3 \text{ cm}$$

$$\text{Area} = 15 \text{ cm}^2$$



$$\text{Perimeter} = 20.6 \text{ cm}$$

$$\text{Area} = 13.3 \text{ cm}^2$$