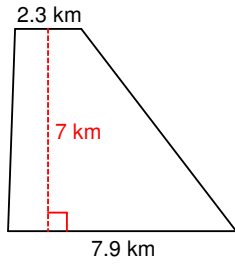
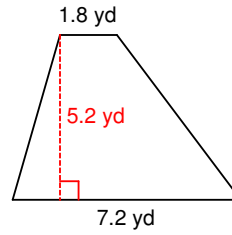


Area of Trapezoids (4)

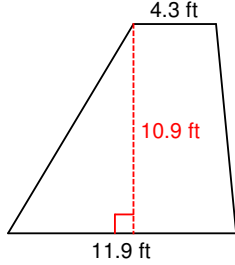
1)



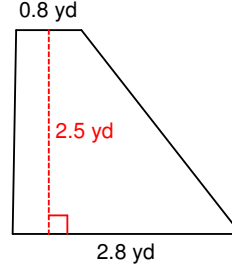
2)



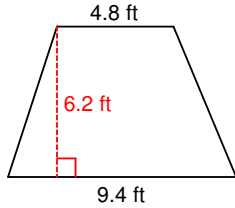
3)



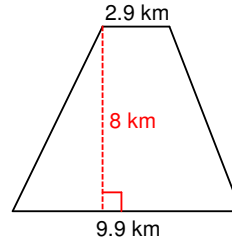
4)



5)

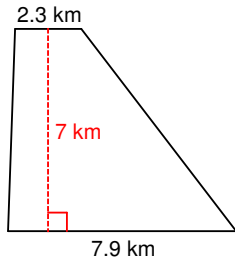


6)



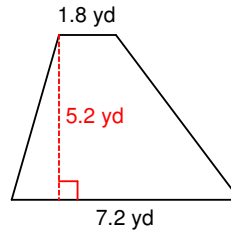
Area of Trapezoids (4) Answers

1)



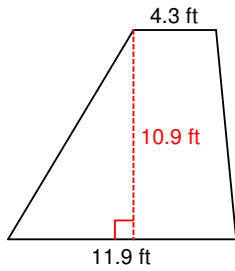
$$35.7 \text{ km}^2$$

2)



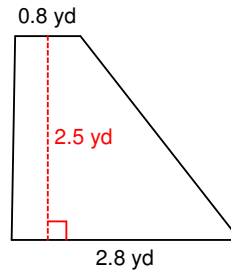
$$23.4 \text{ yd}^2$$

3)



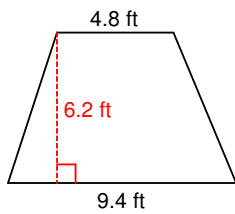
$$88.29 \text{ ft}^2$$

4)



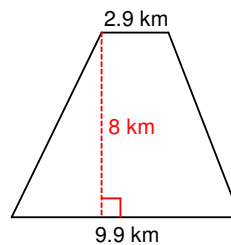
$$4.5 \text{ yd}^2$$

5)



$$44.02 \text{ ft}^2$$

6)



$$51.2 \text{ km}^2$$