

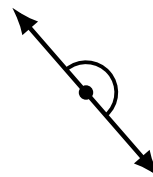
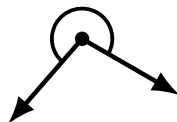
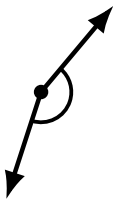
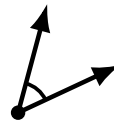
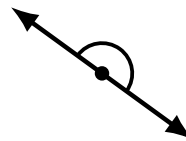
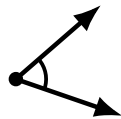
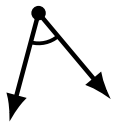
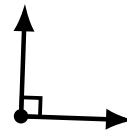
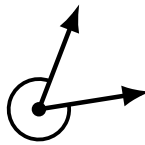
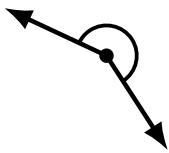
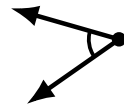
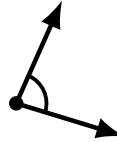
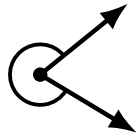
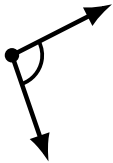

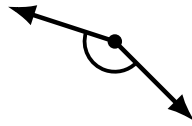
# Identifying Angle Types (A)

Name: \_\_\_\_\_

Date: \_\_\_\_\_

Score: \_\_\_\_\_

Identify each angle as acute, obtuse, right, straight or reflex.



# Identifying Angle Types (A) Answers

Name: \_\_\_\_\_

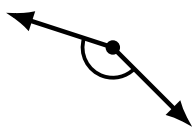
Date: \_\_\_\_\_

Score: \_\_\_\_\_

Identify each angle as acute, obtuse, right, straight or reflex.




obtuse




obtuse



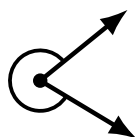
obtuse



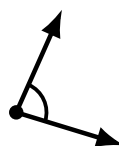
obtuse



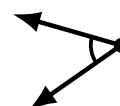
obtuse



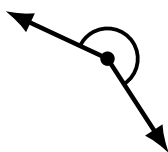
reflex



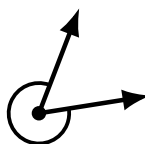
acute



acute



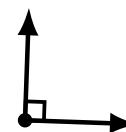
reflex



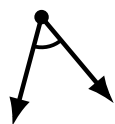
reflex



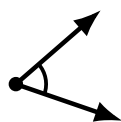
right



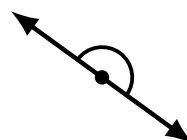
right



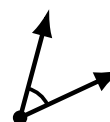
acute



acute




straight



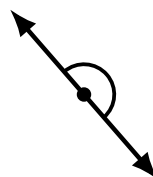
acute



obtuse



reflex



straight



reflex