

## ORDERING DECIMAL TENTHS (D)

INSTRUCTIONS: SPIDERS HAVE MIXED UP FIVE LISTS OF NUMBERS. RE-WRITE EACH SET OF NUMBERS FROM LEAST TO GREATEST.




9.9 3.2 3.2 5.2 8.3 7.5 5.5 3.8




3.5 2.8 0 2.7 3.8 9.7 4.8 0.2



9.2 0.5 0.6 8 7.3 8.6 7 8.7



6.8 1.6 4.3 3 0.9 0.1 0.7 2.7



8.9 2.5 3.4 7.6 4.4 2.6 9.3 0.4

## ORDERING DECIMAL TENTHS (D) ANSWERS

INSTRUCTIONS: SPIDERS HAVE MIXED UP FIVE LISTS OF NUMBERS. RE-WRITE EACH SET OF NUMBERS FROM LEAST TO GREATEST.



9.9 3.2 3.2 5.2 8.3 7.5 5.5 3.8

3.2 3.2 3.8 5.2 5.5 7.5 8.3 9.9




3.5 2.8 0 2.7 3.8 9.7 4.8 0.2

0 0.2 2.7 2.8 3.5 3.8 4.8 9.7




9.2 0.5 0.6 8 7.3 8.6 7 8.7

0.5 0.6 7 7.3 8 8.6 8.7 9.2



6.8 1.6 4.3 3 0.9 0.1 0.7 2.7

0.1 0.7 0.9 1.6 2.7 3 4.3 6.8



8.9 2.5 3.4 7.6 4.4 2.6 9.3 0.4

0.4 2.5 2.6 3.4 4.4 7.6 8.9 9.3