

## ORDERING DECIMAL TENTHS (E)

INSTRUCTIONS: SPIDERS HAVE MIXED UP FIVE LISTS OF NUMBERS. RE-WRITE EACH SET OF NUMBERS FROM LEAST TO GREATEST.




7.1 8.9 0.3 3.2 1.7 2.2 3.7 9.7




2.4 0.9 4 2 4.7 6.1 6.8 3.4



0.6 7.6 2.5 3.8 7.1 5.3 4.1 1.8



0.5 2.7 1.5 4.3 9.7 4.2 8.5 5.8



4.5 6.2 9.1 7.8 2.7 6.5 4.7 2.4

## ORDERING DECIMAL TENTHS (E) ANSWERS

INSTRUCTIONS: SPIDERS HAVE MIXED UP FIVE LISTS OF NUMBERS. RE-WRITE EACH SET OF NUMBERS FROM LEAST TO GREATEST.



7.1 8.9 0.3 3.2 1.7 2.2 3.7 9.7

0.3 1.7 2.2 3.2 3.7 7.1 8.9 9.7




2.4 0.9 4 2 4.7 6.1 6.8 3.4

0.9 2 2.4 3.4 4 4.7 6.1 6.8




0.6 7.6 2.5 3.8 7.1 5.3 4.1 1.8

0.6 1.8 2.5 3.8 4.1 5.3 7.1 7.6



0.5 2.7 1.5 4.3 9.7 4.2 8.5 5.8

0.5 1.5 2.7 4.2 4.3 5.8 8.5 9.7



4.5 6.2 9.1 7.8 2.7 6.5 4.7 2.4

2.4 2.7 4.5 4.7 6.2 6.5 7.8 9.1