

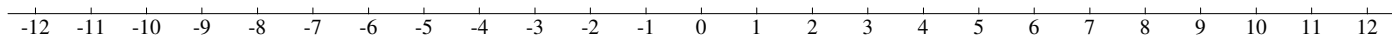
---

# Ordering Integers (J)

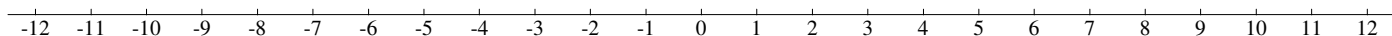
---

Instructions: Order each set of integers on the number line.

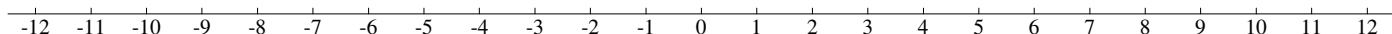
Set 1: -11, -4, 1, 6, -2, 9, -9, -1, 11, 7



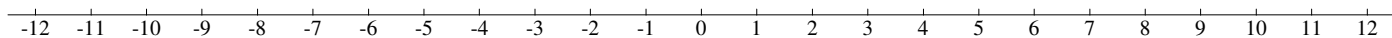
Set 2: -11, 0, -12, -3, -2, -12, 1, 0, -1, -12



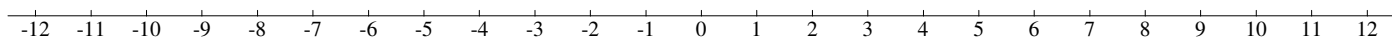
Set 3: -10, 10, -1, -12, -4, 11, 12, 9, -8, 4



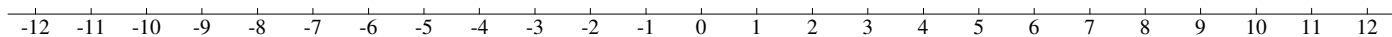
Set 4: 6, 2, 4, 12, -8, 5, -4, 2, 6, -10



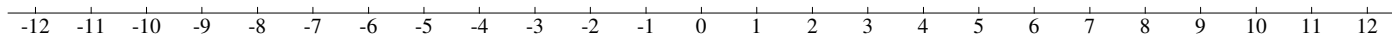
Set 5: 1, 4, 10, 0, -1, -11, 11, -3, 0, -2



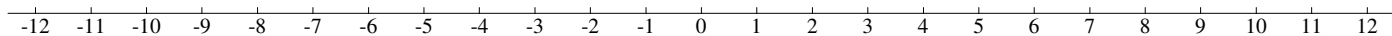
Set 6: -4, -7, 7, 4, 6, -8, 7, -12, -9, -1



Set 7: -3, 0, 9, 5, -6, -8, 10, 0, 10, 12



Set 8: 5, -9, 7, 7, -4, -12, 2, -6, 5, 3



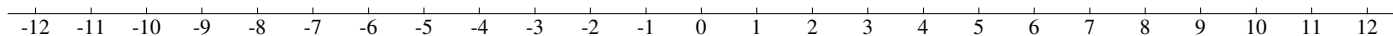
---

# Ordering Integers (J) Answers

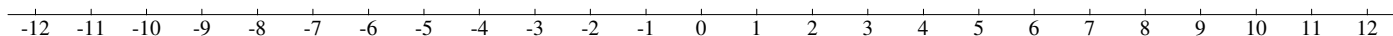
---

Instructions: Order each set of integers on the number line.

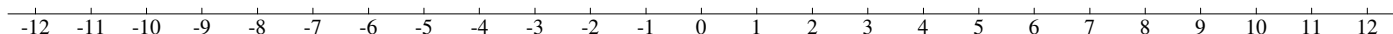
Set 1: -11, -4, 1, 6, -2, 9, -9, -1, 11, 7



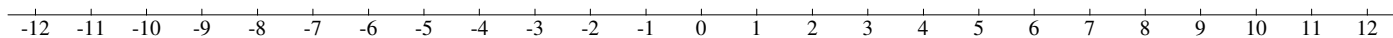
Set 2: -11, 0, -12, -3, -2, -12, 1, 0, -1, -12



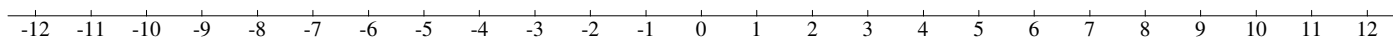
Set 3: -10, 10, -1, -12, -4, 11, 12, 9, -8, 4



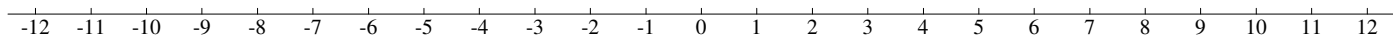
Set 4: 6, 2, 4, 12, -8, 5, -4, 2, 6, -10



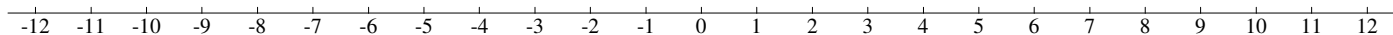
Set 5: 1, 4, 10, 0, -1, -11, 11, -3, 0, -2



Set 6: -4, -7, 7, 4, 6, -8, 7, -12, -9, -1



Set 7: -3, 0, 9, 5, -6, -8, 10, 0, 10, 12



Set 8: 5, -9, 7, 7, -4, -12, 2, -6, 5, 3

