

Measuring Length (I)

Name: _____ Date: _____ Score: _____

Measure the length of each bar **to the nearest centimeter**.


1.

Bar length:



2.

Bar length:



3.

Bar length:



4.

Bar length:



5.

Bar length:




6.

Bar length:



7.

Bar length:



8.

Bar length:




9.

Bar length:



10.

Bar length:



Measuring Length (I) Answers

Name: _____ Date: _____ Score: _____

Measure the length of each bar **to the nearest centimeter**.


1.

Bar length: 7 cm



2.

Bar length: 16 cm




3.

Bar length: 6 cm



4.

Bar length: 9 cm



5.

Bar length: 12 cm




6.

Bar length: 8 cm



7.

Bar length: 5 cm




8.

Bar length: 3 cm



9.

Bar length: 13 cm



10.

Bar length: 10 cm

