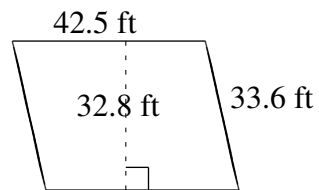
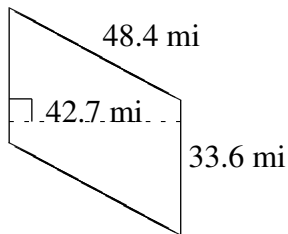
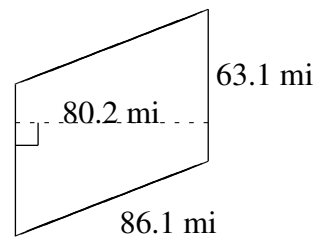
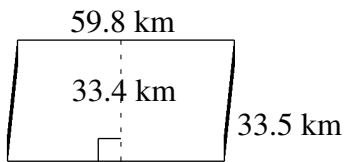
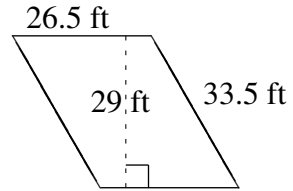
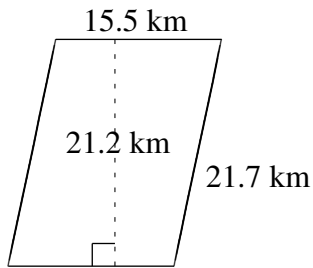


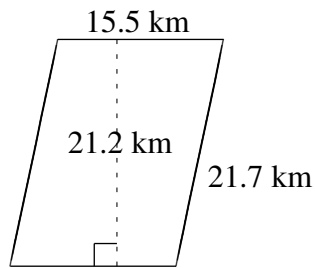
Area and Perimeter of Parallelograms (A)

Find the area and perimeter of each parallelogram.

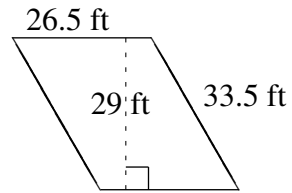


Area and Perimeter of Parallelograms (A) Answers

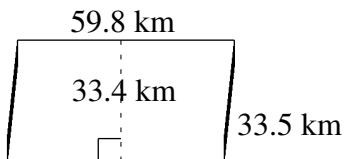
Find the area and perimeter of each parallelogram.



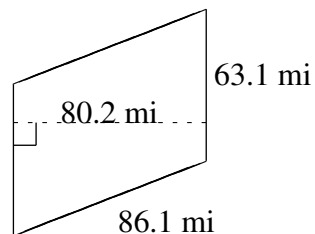
$$A = 328.60 \text{ km}^2$$
$$P = 74.4 \text{ km}$$



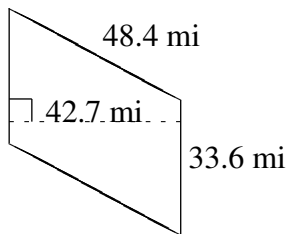
$$A = 768.5 \text{ ft}^2$$
$$P = 120.0 \text{ ft}$$



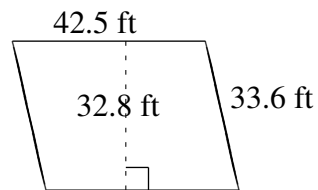
$$A = 1997.32 \text{ km}^2$$
$$P = 186.6 \text{ km}$$



$$A = 5060.62 \text{ mi}^2$$
$$P = 298.4 \text{ mi}$$



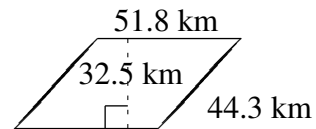
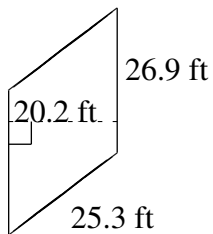
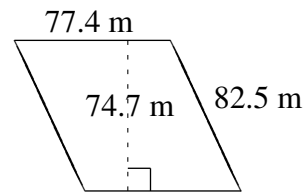
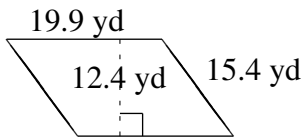
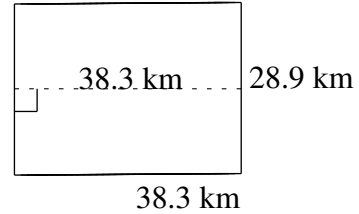
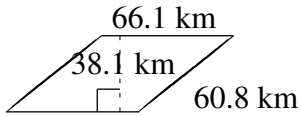
$$A = 1434.72 \text{ mi}^2$$
$$P = 164.0 \text{ mi}$$



$$A = 1394.00 \text{ ft}^2$$
$$P = 152.2 \text{ ft}$$

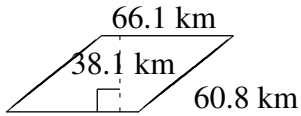
Area and Perimeter of Parallelograms (B)

Find the area and perimeter of each parallelogram.

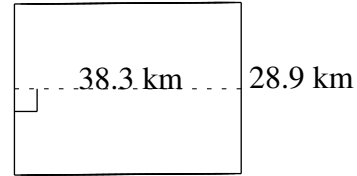


Area and Perimeter of Parallelograms (B) Answers

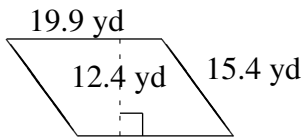
Find the area and perimeter of each parallelogram.



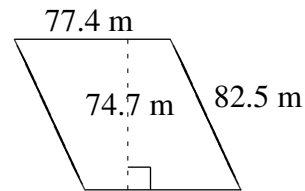
$$A = 2518.41 \text{ km}^2$$
$$P = 253.8 \text{ km}$$



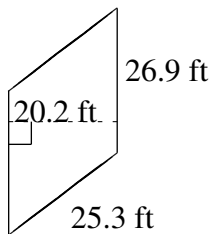
$$A = 1106.87 \text{ km}^2$$
$$P = 134.4 \text{ km}$$



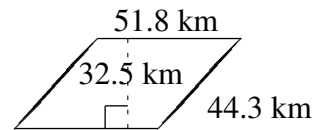
$$A = 246.76 \text{ yd}^2$$
$$P = 70.6 \text{ yd}$$



$$A = 5781.78 \text{ m}^2$$
$$P = 319.8 \text{ m}$$



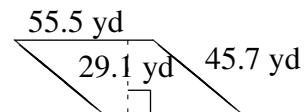
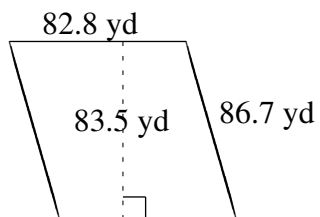
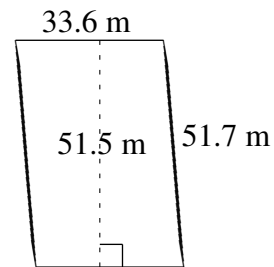
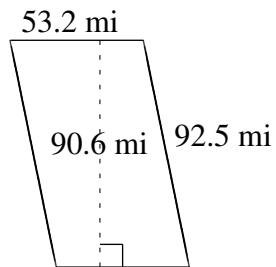
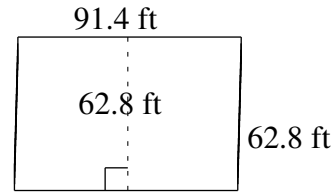
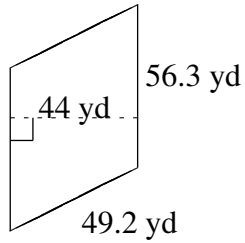
$$A = 543.38 \text{ ft}^2$$
$$P = 104.4 \text{ ft}$$



$$A = 1683.50 \text{ km}^2$$
$$P = 192.2 \text{ km}$$

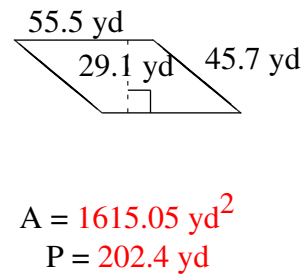
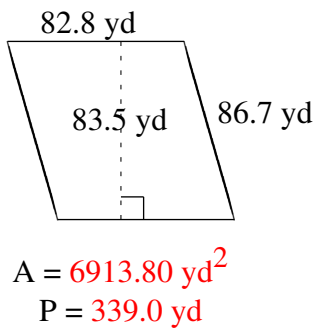
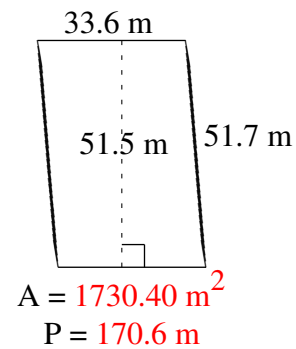
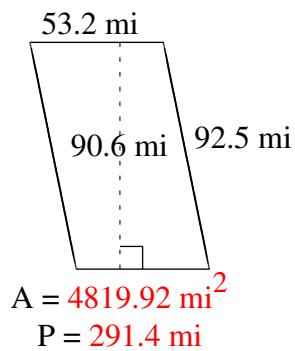
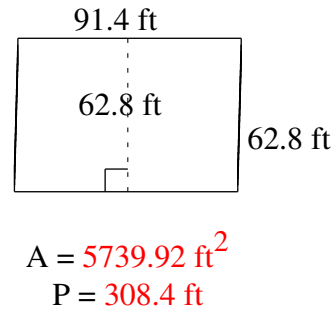
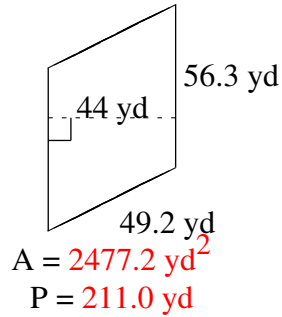
Area and Perimeter of Parallelograms (C)

Find the area and perimeter of each parallelogram.



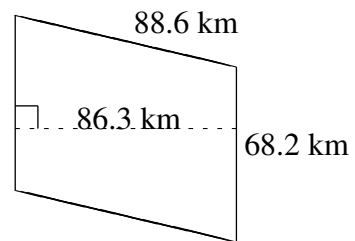
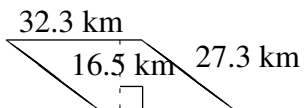
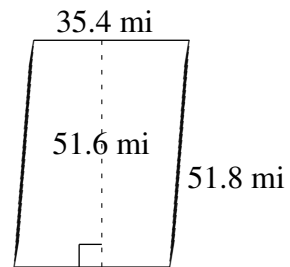
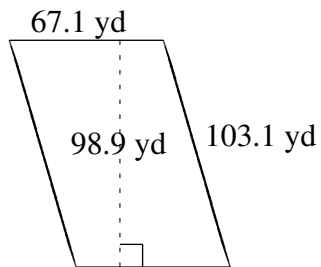
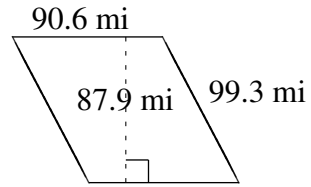
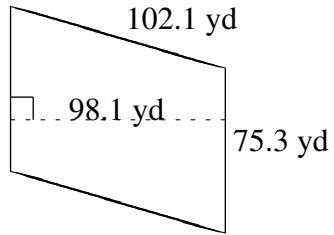
Area and Perimeter of Parallelograms (C) Answers

Find the area and perimeter of each parallelogram.



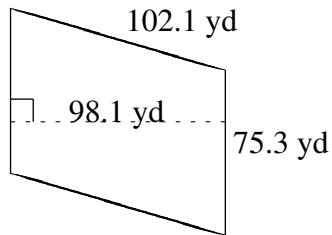
Area and Perimeter of Parallelograms (D)

Find the area and perimeter of each parallelogram.

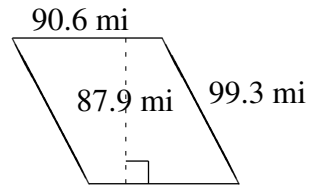


Area and Perimeter of Parallelograms (D) Answers

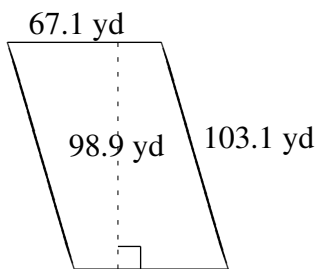
Find the area and perimeter of each parallelogram.



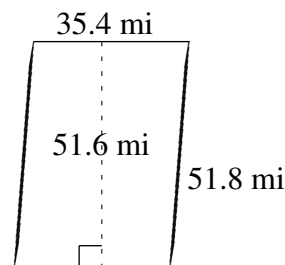
$$A = 7386.93 \text{ yd}^2$$
$$P = 354.8 \text{ yd}$$



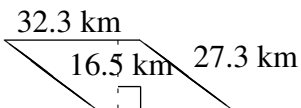
$$A = 7963.74 \text{ mi}^2$$
$$P = 379.8 \text{ mi}$$



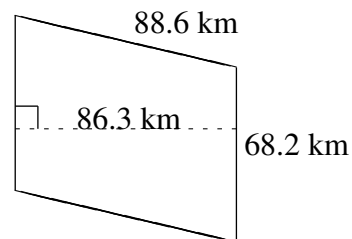
$$A = 6636.19 \text{ yd}^2$$
$$P = 340.4 \text{ yd}$$



$$A = 1826.64 \text{ mi}^2$$
$$P = 174.4 \text{ mi}$$



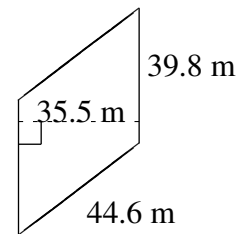
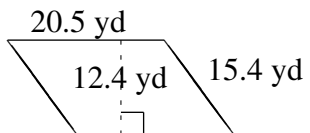
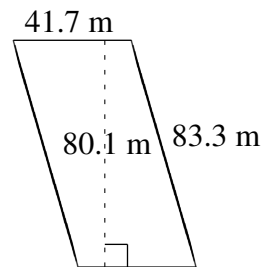
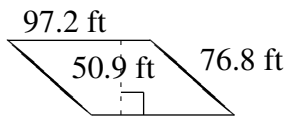
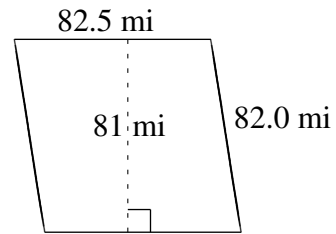
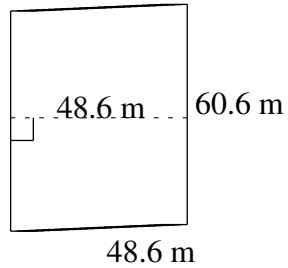
$$A = 532.95 \text{ km}^2$$
$$P = 119.2 \text{ km}$$



$$A = 5885.66 \text{ km}^2$$
$$P = 313.6 \text{ km}$$

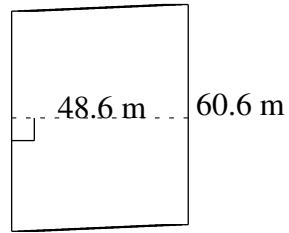
Area and Perimeter of Parallelograms (E)

Find the area and perimeter of each parallelogram.

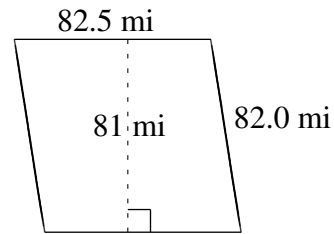


Area and Perimeter of Parallelograms (E) Answers

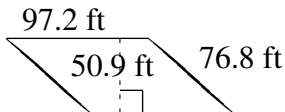
Find the area and perimeter of each parallelogram.



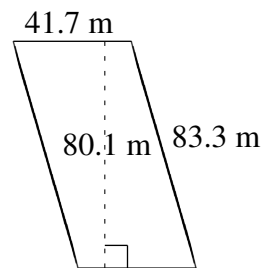
$$A = 2945.16 \text{ m}^2$$
$$P = 218.4 \text{ m}$$



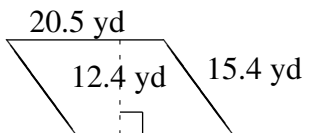
$$A = 6682.5 \text{ mi}^2$$
$$P = 329.0 \text{ mi}$$



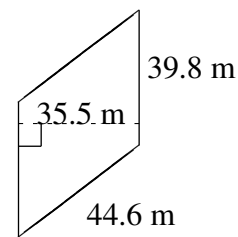
$$A = 4947.48 \text{ ft}^2$$
$$P = 348.0 \text{ ft}$$



$$A = 3340.17 \text{ m}^2$$
$$P = 250.0 \text{ m}$$



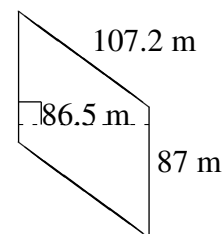
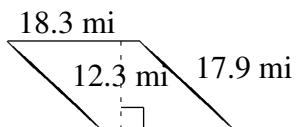
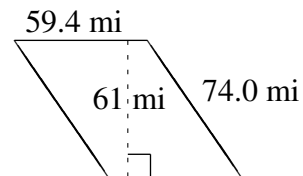
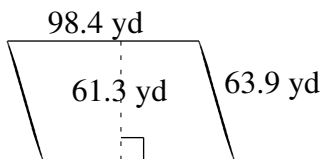
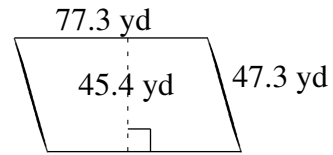
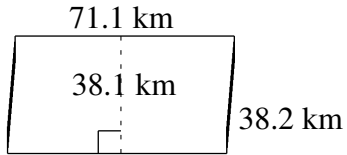
$$A = 254.20 \text{ yd}^2$$
$$P = 71.8 \text{ yd}$$



$$A = 1412.90 \text{ m}^2$$
$$P = 168.8 \text{ m}$$

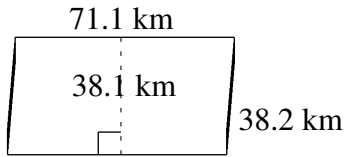
Area and Perimeter of Parallelograms (F)

Find the area and perimeter of each parallelogram.

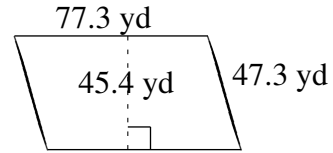


Area and Perimeter of Parallelograms (F) Answers

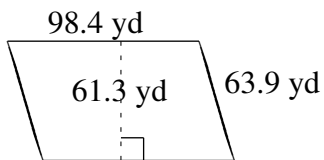
Find the area and perimeter of each parallelogram.



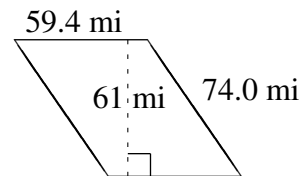
$$A = 2708.91 \text{ km}^2$$
$$P = 218.6 \text{ km}$$



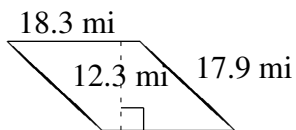
$$A = 3509.42 \text{ yd}^2$$
$$P = 249.2 \text{ yd}$$



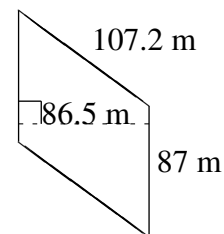
$$A = 6031.92 \text{ yd}^2$$
$$P = 324.6 \text{ yd}$$



$$A = 3623.4 \text{ mi}^2$$
$$P = 266.8 \text{ mi}$$



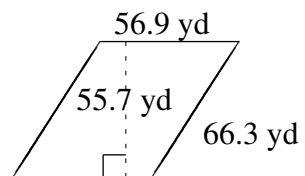
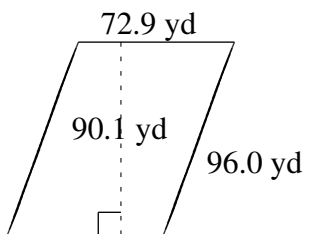
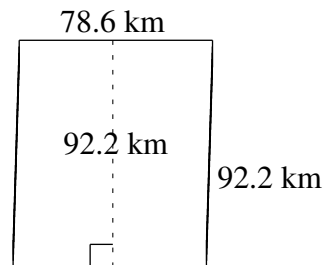
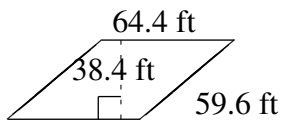
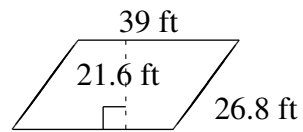
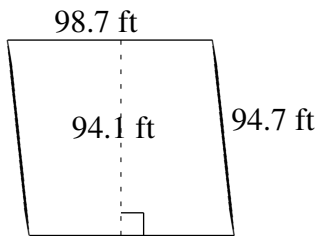
$$A = 225.09 \text{ mi}^2$$
$$P = 72.4 \text{ mi}$$



$$A = 7525.5 \text{ m}^2$$
$$P = 388.4 \text{ m}$$

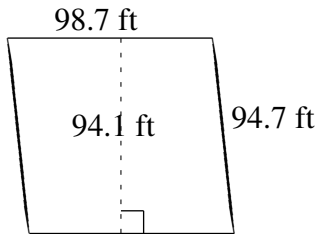
Area and Perimeter of Parallelograms (G)

Find the area and perimeter of each parallelogram.

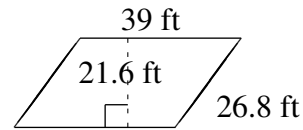


Area and Perimeter of Parallelograms (G) Answers

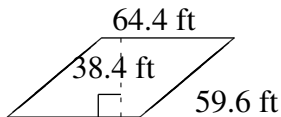
Find the area and perimeter of each parallelogram.



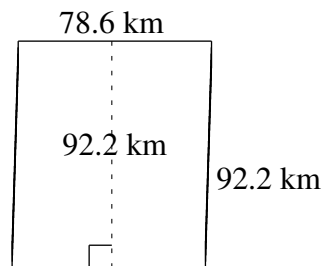
$$A = 9287.67 \text{ ft}^2$$
$$P = 386.8 \text{ ft}$$



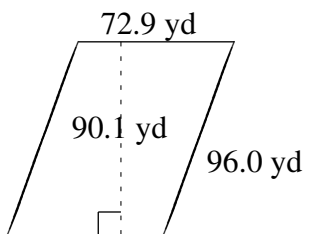
$$A = 842.4 \text{ ft}^2$$
$$P = 131.6 \text{ ft}$$



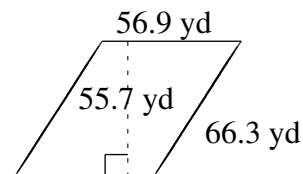
$$A = 2472.96 \text{ ft}^2$$
$$P = 248.0 \text{ ft}$$



$$A = 7246.92 \text{ km}^2$$
$$P = 341.6 \text{ km}$$



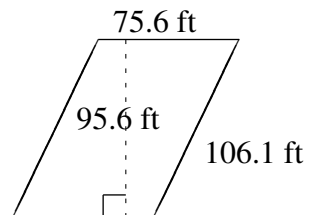
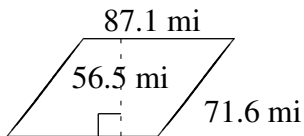
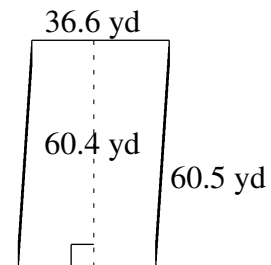
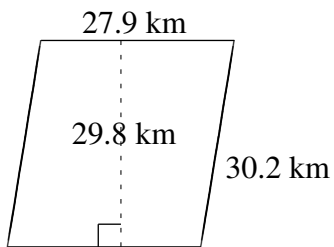
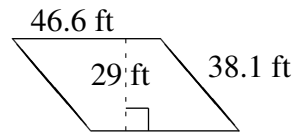
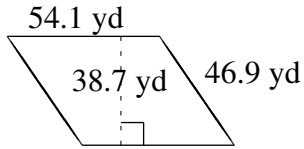
$$A = 6568.29 \text{ yd}^2$$
$$P = 337.8 \text{ yd}$$



$$A = 3169.33 \text{ yd}^2$$
$$P = 246.4 \text{ yd}$$

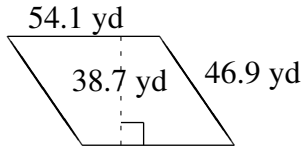
Area and Perimeter of Parallelograms (H)

Find the area and perimeter of each parallelogram.

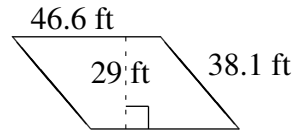


Area and Perimeter of Parallelograms (H) Answers

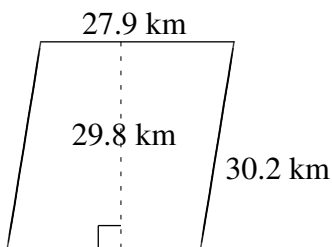
Find the area and perimeter of each parallelogram.



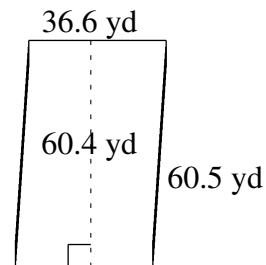
$$A = 2093.67 \text{ yd}^2$$
$$P = 202.0 \text{ yd}$$



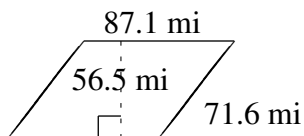
$$A = 1351.4 \text{ ft}^2$$
$$P = 169.4 \text{ ft}$$



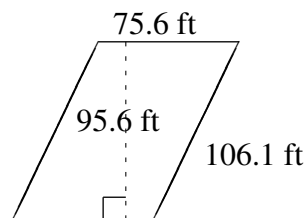
$$A = 831.42 \text{ km}^2$$
$$P = 116.2 \text{ km}$$



$$A = 2210.64 \text{ yd}^2$$
$$P = 194.2 \text{ yd}$$



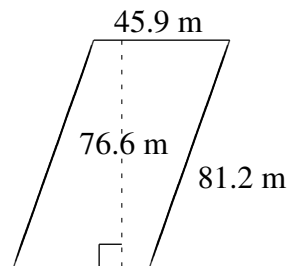
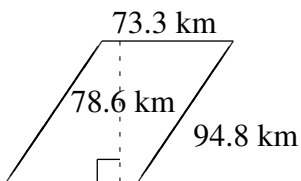
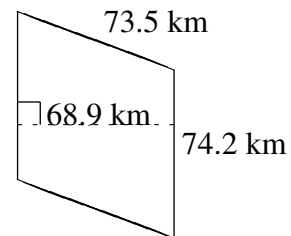
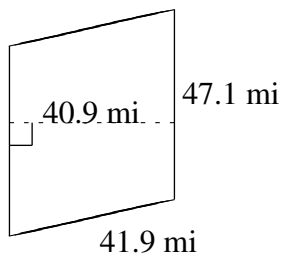
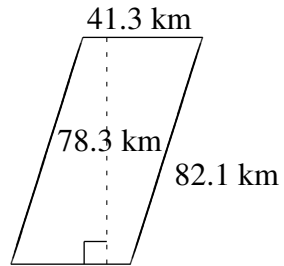
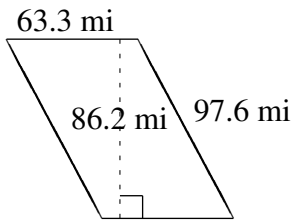
$$A = 4921.15 \text{ mi}^2$$
$$P = 317.4 \text{ mi}$$



$$A = 7227.36 \text{ ft}^2$$
$$P = 363.4 \text{ ft}$$

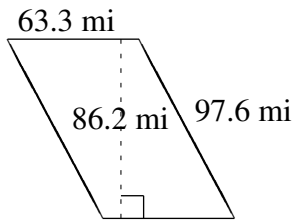
Area and Perimeter of Parallelograms (I)

Find the area and perimeter of each parallelogram.

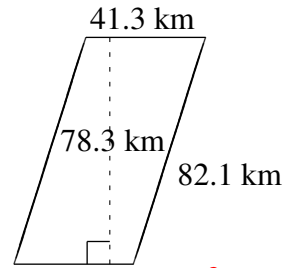


Area and Perimeter of Parallelograms (I) Answers

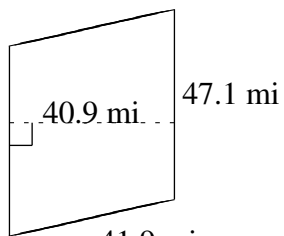
Find the area and perimeter of each parallelogram.



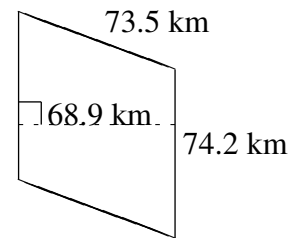
$$A = 5456.46 \text{ mi}^2$$
$$P = 321.8 \text{ mi}$$



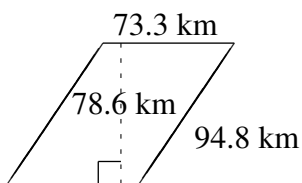
$$A = 3233.79 \text{ km}^2$$
$$P = 246.8 \text{ km}$$



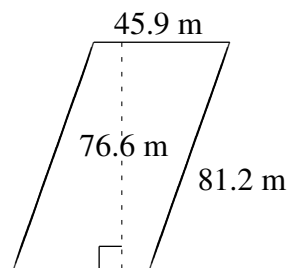
$$A = 1926.39 \text{ mi}^2$$
$$P = 178.0 \text{ mi}$$



$$A = 5112.38 \text{ km}^2$$
$$P = 295.4 \text{ km}$$



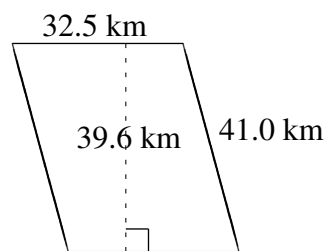
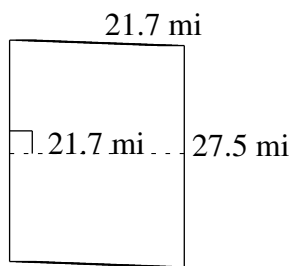
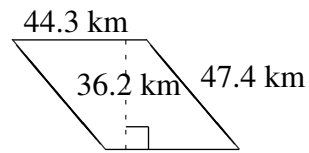
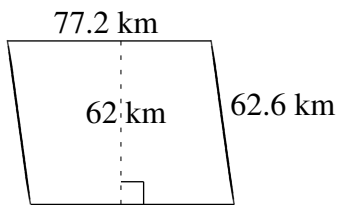
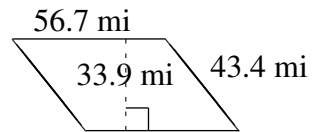
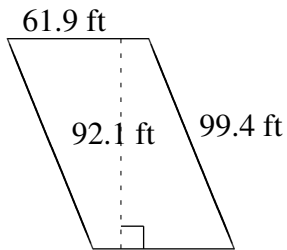
$$A = 5761.38 \text{ km}^2$$
$$P = 336.2 \text{ km}$$



$$A = 3515.94 \text{ m}^2$$
$$P = 254.2 \text{ m}$$

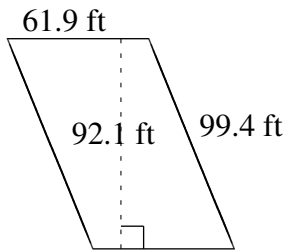
Area and Perimeter of Parallelograms (J)

Find the area and perimeter of each parallelogram.

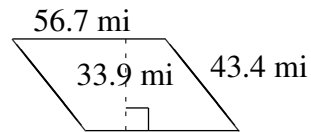


Area and Perimeter of Parallelograms (J) Answers

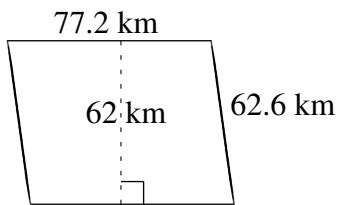
Find the area and perimeter of each parallelogram.



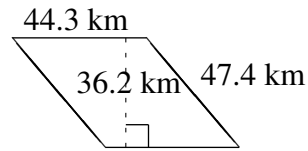
$$A = 5700.99 \text{ ft}^2$$
$$P = 322.6 \text{ ft}$$



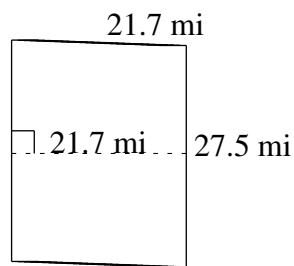
$$A = 1922.13 \text{ mi}^2$$
$$P = 200.2 \text{ mi}$$



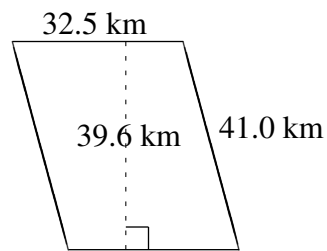
$$A = 4786.4 \text{ km}^2$$
$$P = 279.6 \text{ km}$$



$$A = 1603.66 \text{ km}^2$$
$$P = 183.4 \text{ km}$$



$$A = 596.75 \text{ mi}^2$$
$$P = 98.4 \text{ mi}$$



$$A = 1287.00 \text{ km}^2$$
$$P = 147.0 \text{ km}$$