
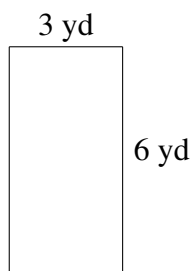
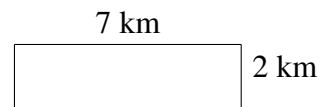
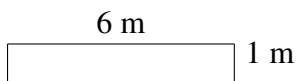
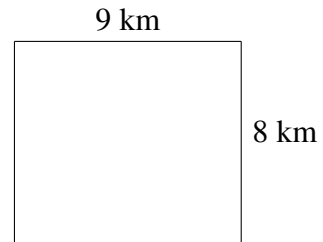
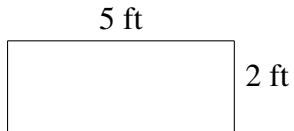


Area and Perimeter of Rectangles (I)

Find the area and perimeter of each rectangle.



Area and Perimeter of Rectangles (I) Answers

Find the area and perimeter of each rectangle.

