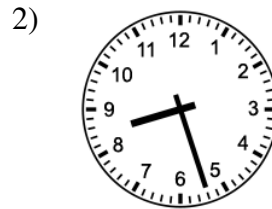


# Telling Time to The Minute (A)


Instructions: Can you tell time to the minute?




\_\_\_\_\_



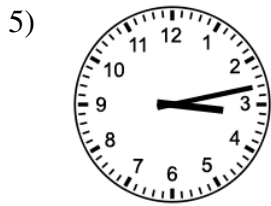
\_\_\_\_\_




\_\_\_\_\_




\_\_\_\_\_




\_\_\_\_\_




\_\_\_\_\_




\_\_\_\_\_



\_\_\_\_\_



\_\_\_\_\_



\_\_\_\_\_

## Telling Time to The Minute Answer (A)

Instructions: Can you tell time to the minute?

