




Count the Change (A)

What is the total amount in each box?



United States coin images from the United States Mint.

Count the Change (A) Answers

What is the total amount in each box?



Box 1 contains 6 coins: 2 quarters, 3 dimes, and 1 nickel.

\$0.85



Box 2 contains 6 coins: 2 quarters, 2 dimes, and 2 pennies.

\$0.52



Box 3 contains 6 coins: 3 nickels, 2 dimes, and 1 penny.

\$0.40




Box 4 contains 6 coins: 2 dimes, 2 nickels, and 2 pennies.

\$0.36



Box 5 contains 6 coins: 2 pennies, 2 dimes, and 1 quarter.

\$0.47



Box 6 contains 6 coins: 2 pennies, 2 nickels, and 2 dimes.

\$0.28

United States coin images from the United States Mint.