



Count the Change (B)

What is the total amount in each box?



United States coin images from the United States Mint.

Count the Change (B) Answers

What is the total amount in each box?




A box containing five quarters and three dimes. The quarters are arranged in two rows: the top row has two quarters and the bottom row has three quarters. The dimes are arranged in two rows: the top row has one dime and the bottom row has two dimes.

\$1.05



A box containing one quarter, two five-cent coins, and two one-cent coins. The quarter is in the top-left position. The five-cent coins are in the top-middle and top-right positions. The one-cent coins are in the bottom-middle and bottom-left positions. The bottom-right position is empty.

\$0.62




A box containing one dime, one five-cent coin, one quarter, and two one-cent coins. The dime is in the top-left position. The five-cent coin is in the top-middle position. The quarter is in the top-right position. The one-cent coins are in the bottom-left and bottom-right positions. The bottom-middle position is empty.

\$0.43



A box containing six quarters arranged in two rows of three.

\$1.50



A box containing three dimes and three one-cent coins. The dimes are in the top row, and the one-cent coins are in the bottom row.

\$0.33



A box containing one quarter, two five-cent coins, one dime, and two one-cent coins. The quarter is in the top-left position. The five-cent coins are in the top-middle and top-right positions. The dime is in the bottom-middle position. The one-cent coins are in the bottom-left and bottom-right positions.

\$0.55

United States coin images from the United States Mint.