



Count the Change (C)

What is the total amount in each box?



United States coin images from the United States Mint.

Count the Change (C) Answers

What is the total amount in each box?




Box 1: Six five-cent coins (nickels).

\$0.30




Box 2: Three quarter-dollar coins and three one-dime coins.

\$0.85



Box 3: Four one-cent coins (pennies) and two quarter-dollar coins.

\$0.54



Box 4: One quarter-dollar coin, one one-dime coin, and three one-cent coins.

\$0.43



Box 5: Six one-dime coins (dimes).

\$0.55



Box 6: Two quarter-dollar coins, one five-cent coin, and three one-dime coins.

\$0.80

United States coin images from the United States Mint.