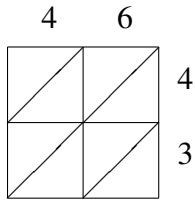
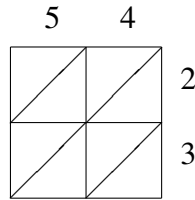


Lattice Multiplication (C)

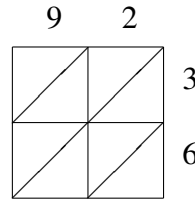
Use lattice multiplication to find each product.



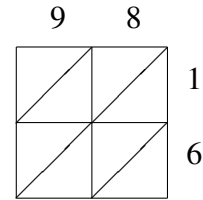
$46 \times 43 = \underline{\hspace{2cm}}$



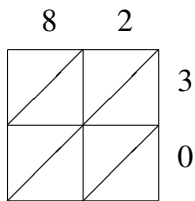
$54 \times 23 = \underline{\hspace{2cm}}$



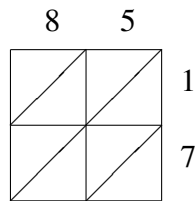
$92 \times 36 = \underline{\hspace{2cm}}$



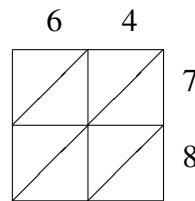
$98 \times 16 = \underline{\hspace{2cm}}$



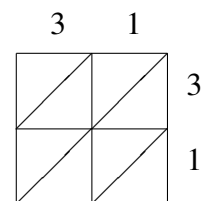
$82 \times 30 = \underline{\hspace{2cm}}$



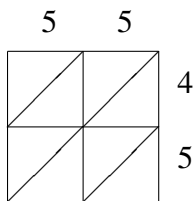
$85 \times 17 = \underline{\hspace{2cm}}$



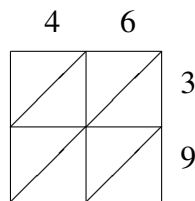
$64 \times 78 = \underline{\hspace{2cm}}$



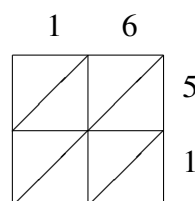
$31 \times 31 = \underline{\hspace{2cm}}$



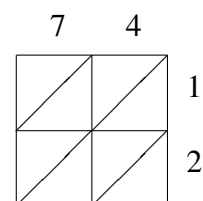
$55 \times 45 = \underline{\hspace{2cm}}$



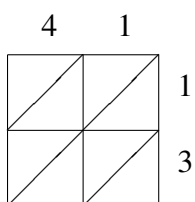
$46 \times 39 = \underline{\hspace{2cm}}$



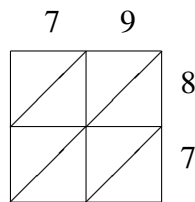
$16 \times 51 = \underline{\hspace{2cm}}$



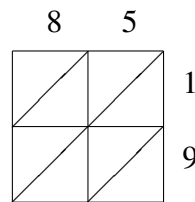
$74 \times 12 = \underline{\hspace{2cm}}$



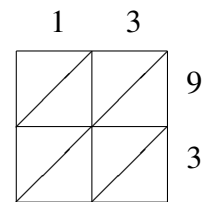
$41 \times 13 = \underline{\hspace{2cm}}$



$79 \times 87 = \underline{\hspace{2cm}}$



$85 \times 19 = \underline{\hspace{2cm}}$



$13 \times 93 = \underline{\hspace{2cm}}$