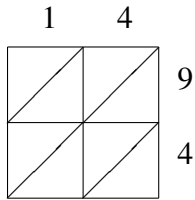
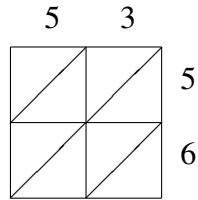


# Lattice Multiplication (D)

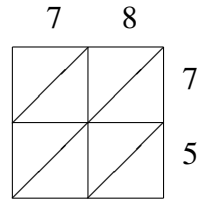
Use lattice multiplication to find each product.



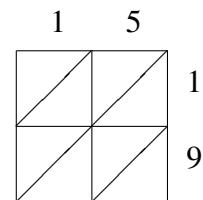
$14 \times 94 = \underline{\hspace{2cm}}$



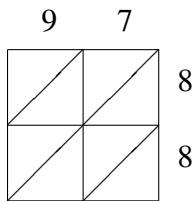
$53 \times 56 = \underline{\hspace{2cm}}$



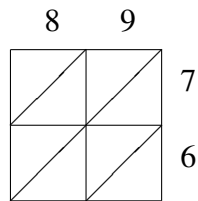
$78 \times 75 = \underline{\hspace{2cm}}$



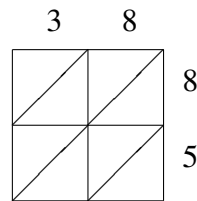
$15 \times 19 = \underline{\hspace{2cm}}$



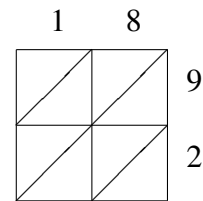
$97 \times 88 = \underline{\hspace{2cm}}$



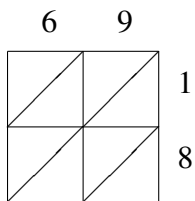
$89 \times 76 = \underline{\hspace{2cm}}$



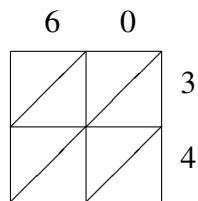
$38 \times 85 = \underline{\hspace{2cm}}$



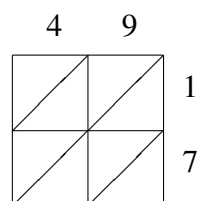
$18 \times 92 = \underline{\hspace{2cm}}$



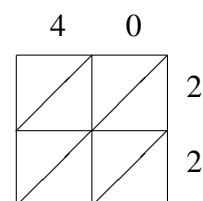
$69 \times 18 = \underline{\hspace{2cm}}$



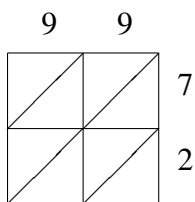
$60 \times 34 = \underline{\hspace{2cm}}$



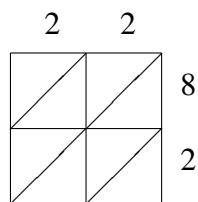
$49 \times 17 = \underline{\hspace{2cm}}$



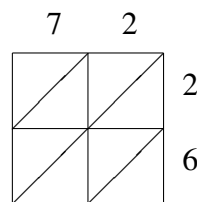
$40 \times 22 = \underline{\hspace{2cm}}$



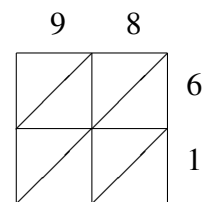
$99 \times 72 = \underline{\hspace{2cm}}$



$22 \times 82 = \underline{\hspace{2cm}}$



$72 \times 26 = \underline{\hspace{2cm}}$



$98 \times 61 = \underline{\hspace{2cm}}$