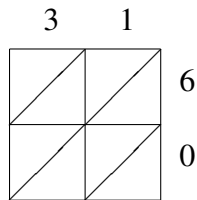
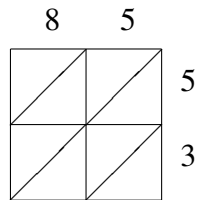


# Lattice Multiplication (H)

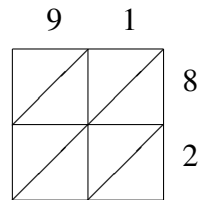
Use lattice multiplication to find each product.



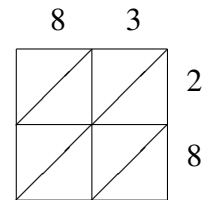
$31 \times 60 = \underline{\hspace{2cm}}$



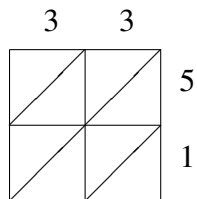
$85 \times 53 = \underline{\hspace{2cm}}$



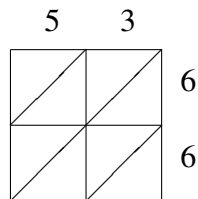
$91 \times 82 = \underline{\hspace{2cm}}$



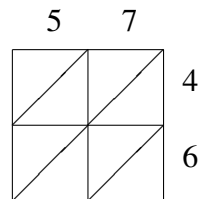
$83 \times 28 = \underline{\hspace{2cm}}$



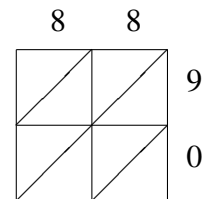
$33 \times 51 = \underline{\hspace{2cm}}$



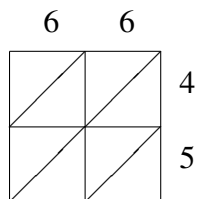
$53 \times 66 = \underline{\hspace{2cm}}$



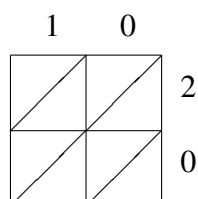
$57 \times 46 = \underline{\hspace{2cm}}$



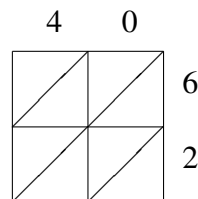
$88 \times 90 = \underline{\hspace{2cm}}$



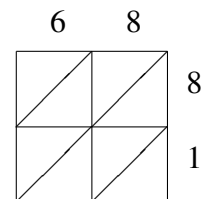
$66 \times 45 = \underline{\hspace{2cm}}$



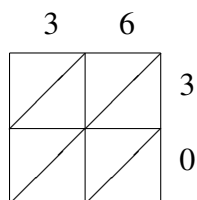
$10 \times 20 = \underline{\hspace{2cm}}$



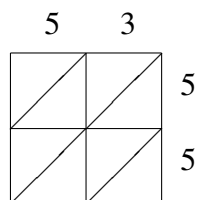
$40 \times 62 = \underline{\hspace{2cm}}$



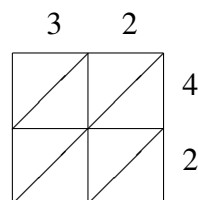
$68 \times 81 = \underline{\hspace{2cm}}$



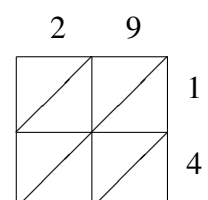
$36 \times 30 = \underline{\hspace{2cm}}$



$53 \times 55 = \underline{\hspace{2cm}}$



$32 \times 42 = \underline{\hspace{2cm}}$



$29 \times 14 = \underline{\hspace{2cm}}$