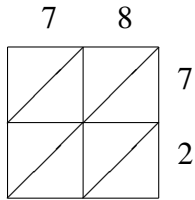
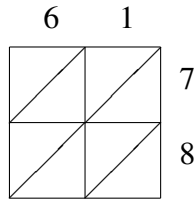


# Lattice Multiplication (I)

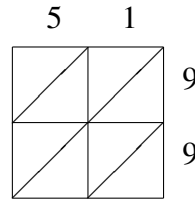
Use lattice multiplication to find each product.



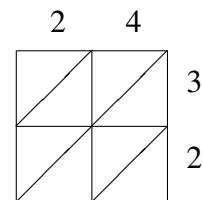
$78 \times 72 = \underline{\hspace{2cm}}$



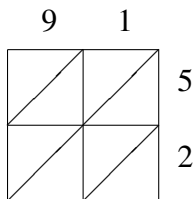
$61 \times 78 = \underline{\hspace{2cm}}$



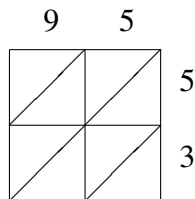
$51 \times 99 = \underline{\hspace{2cm}}$



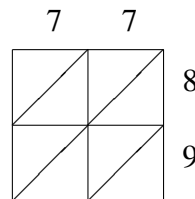
$24 \times 32 = \underline{\hspace{2cm}}$



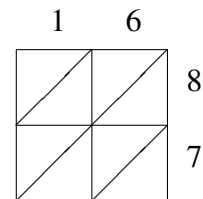
$91 \times 52 = \underline{\hspace{2cm}}$



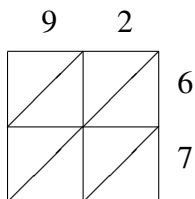
$95 \times 53 = \underline{\hspace{2cm}}$



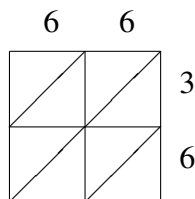
$77 \times 89 = \underline{\hspace{2cm}}$



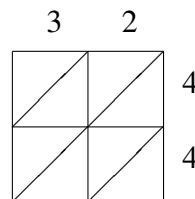
$16 \times 87 = \underline{\hspace{2cm}}$



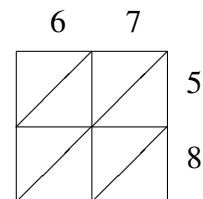
$92 \times 67 = \underline{\hspace{2cm}}$



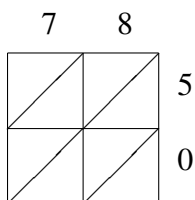
$66 \times 36 = \underline{\hspace{2cm}}$



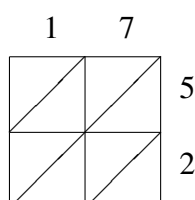
$32 \times 44 = \underline{\hspace{2cm}}$



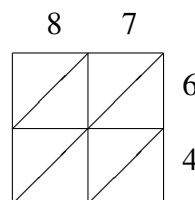
$67 \times 58 = \underline{\hspace{2cm}}$



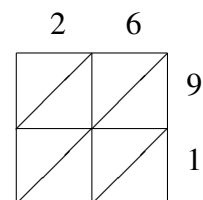
$78 \times 50 = \underline{\hspace{2cm}}$



$17 \times 52 = \underline{\hspace{2cm}}$



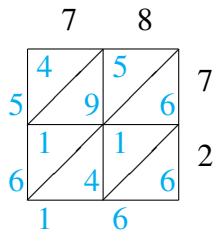
$87 \times 64 = \underline{\hspace{2cm}}$



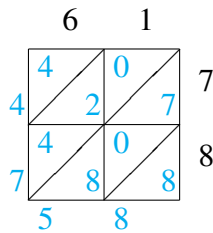
$26 \times 91 = \underline{\hspace{2cm}}$

# Lattice Multiplication (I) Answers

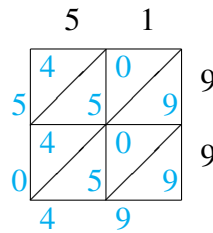
Use lattice multiplication to find each product.



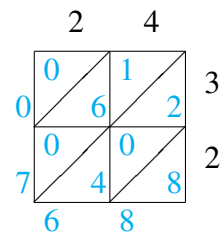
$78 \times 72 = 5,616$



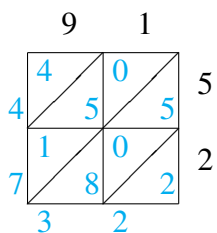
$61 \times 78 = 4,758$



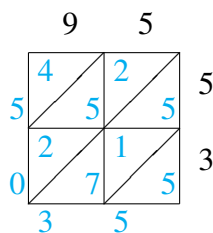
$51 \times 99 = 5,049$



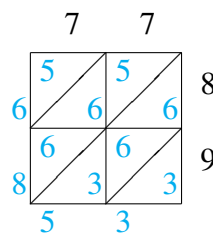
$24 \times 32 = 768$



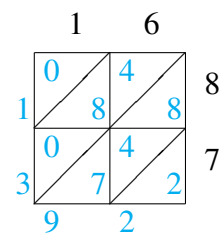
$91 \times 52 = 4,732$



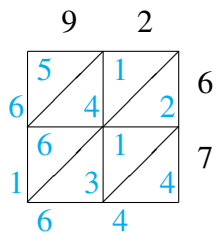
$95 \times 53 = 5,035$



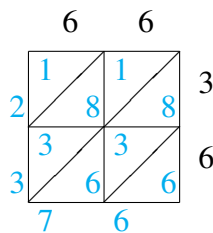
$77 \times 89 = 6,853$



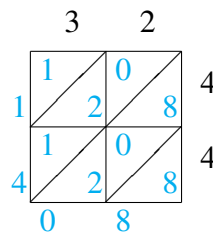
$16 \times 87 = 1,392$



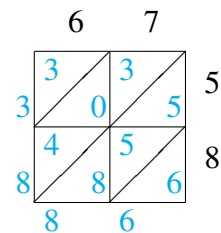
$92 \times 67 = 6,164$



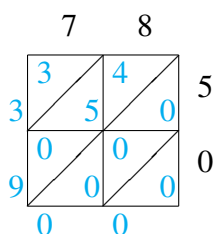
$66 \times 36 = 2,376$



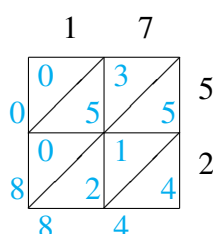
$32 \times 44 = 1,408$



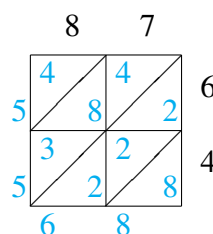
$67 \times 58 = 3,886$



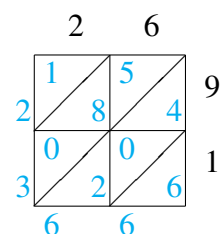
$78 \times 50 = 3,900$



$17 \times 52 = 884$



$87 \times 64 = 5,568$



$26 \times 91 = 2,366$