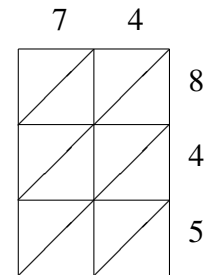
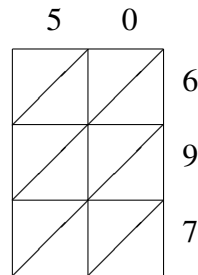
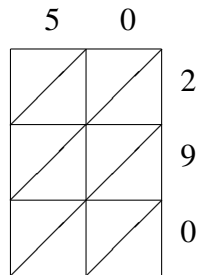
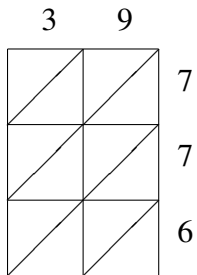


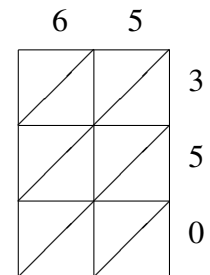
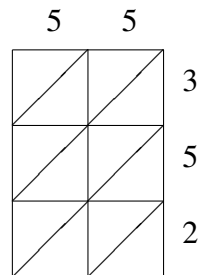
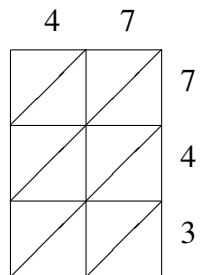
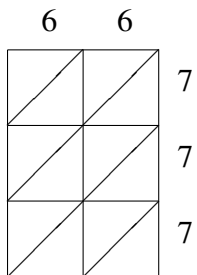
# Lattice Multiplication (D)

Use lattice multiplication to find each product.



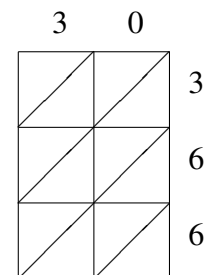
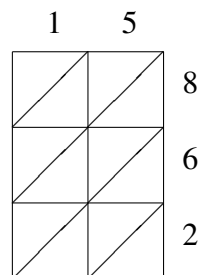
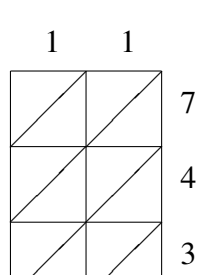
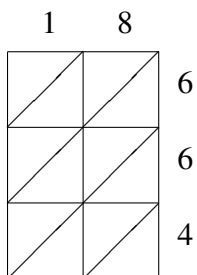
$39 \times 776 =$ 
 $50 \times 290 =$ 
 $50 \times 697 =$ 
 $74 \times 845 =$

\_\_\_\_\_
\_\_\_\_\_
\_\_\_\_\_
\_\_\_\_\_



$66 \times 777 =$ 
 $47 \times 743 =$ 
 $55 \times 352 =$ 
 $65 \times 350 =$

\_\_\_\_\_
\_\_\_\_\_
\_\_\_\_\_
\_\_\_\_\_

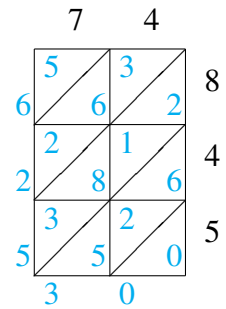
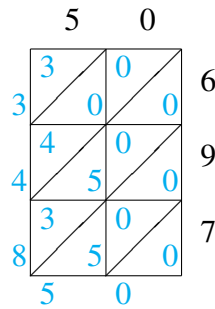
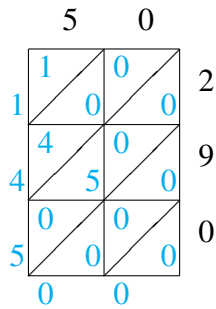
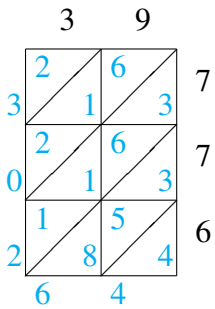


$18 \times 664 =$ 
 $11 \times 743 =$ 
\_\_\_\_\_
 $15 \times 862 =$ 
 $30 \times 366 =$

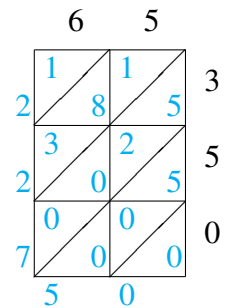
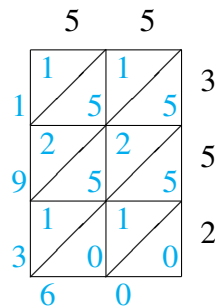
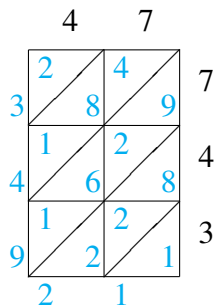
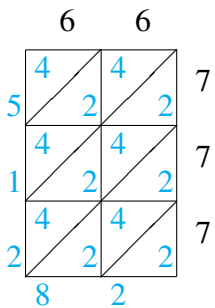
\_\_\_\_\_
\_\_\_\_\_
\_\_\_\_\_
\_\_\_\_\_

# Lattice Multiplication (D) Answers

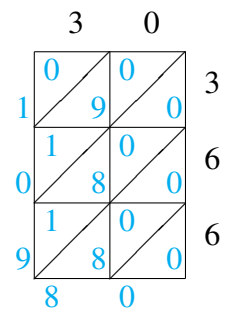
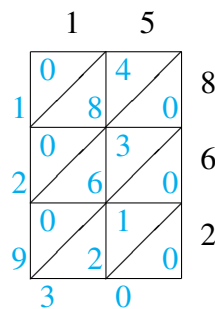
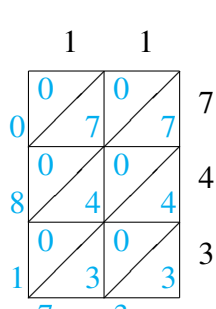
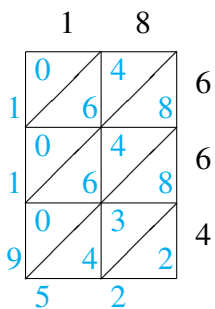
Use lattice multiplication to find each product.



$$\begin{array}{r} 39 \\ 30,264 \end{array} \times 776 = \begin{array}{r} 50 \\ 14,500 \end{array} \times 290 = \begin{array}{r} 50 \\ 34,850 \end{array} \times 697 = \begin{array}{r} 74 \\ 62,530 \end{array} \times 845 =$$



$$\begin{array}{r} 66 \\ 51,282 \end{array} \times 777 = \begin{array}{r} 47 \\ 34,921 \end{array} \times 743 = \begin{array}{r} 55 \\ 19,360 \end{array} \times 352 = \begin{array}{r} 65 \\ 22,750 \end{array} \times 350 =$$



$$\begin{array}{r} 18 \\ 11,952 \end{array} \times 664 = 11 \times 743 = 8,173 \quad \begin{array}{r} 15 \\ 12,930 \end{array} \times 862 = \begin{array}{r} 30 \\ 10,980 \end{array} \times 366 =$$