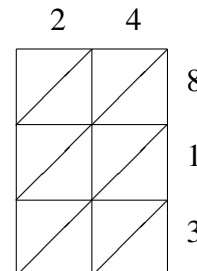
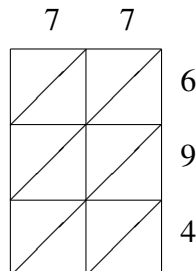
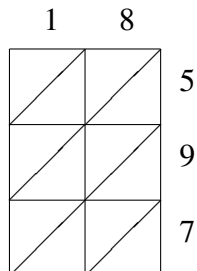
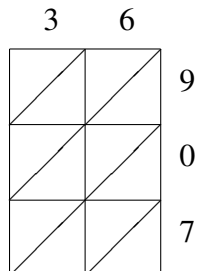
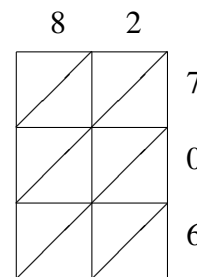
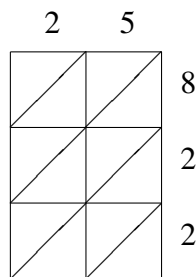
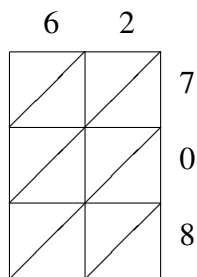
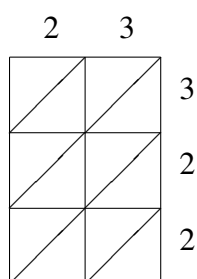


# Lattice Multiplication (H)

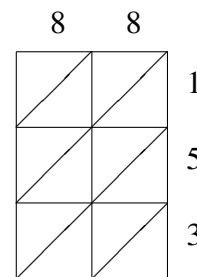
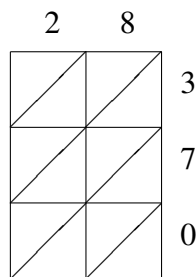
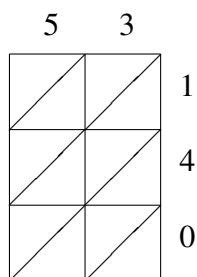
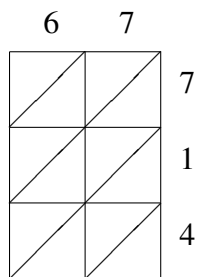
Use lattice multiplication to find each product.



$36 \times 907 =$       $18 \times 597 =$       $77 \times 694 =$       $24 \times 813 =$   
 \_\_\_\_\_



$23 \times 322 =$       $62 \times 708 =$       $25 \times 822 =$       $82 \times 706 =$   
 \_\_\_\_\_



$67 \times 714 =$       $53 \times 140 =$       $28 \times 370 =$       $88 \times 153 =$   
 \_\_\_\_\_