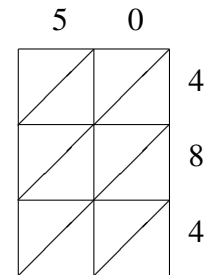
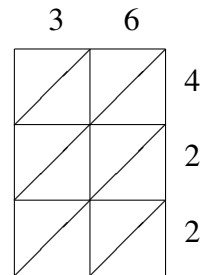
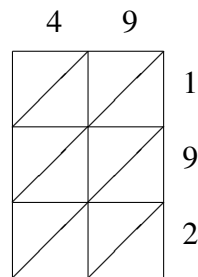
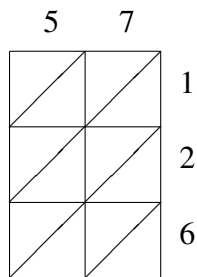
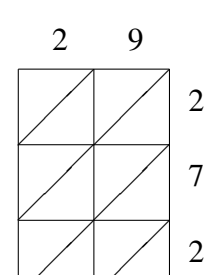
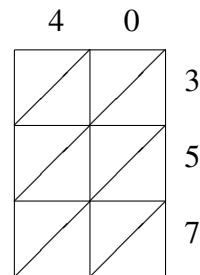
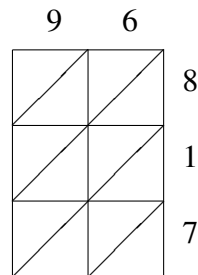
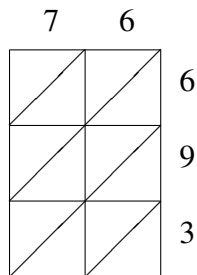


Lattice Multiplication (I)

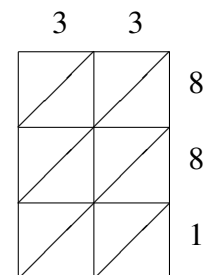
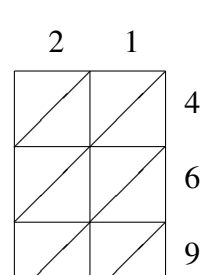
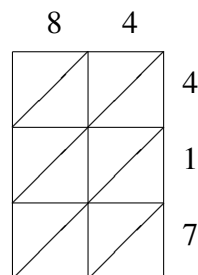
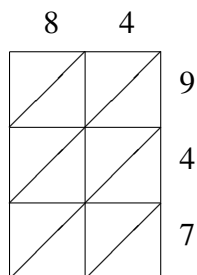
Use lattice multiplication to find each product.



$$57 \times 126 = \underline{\quad\quad\quad} \quad 49 \times 192 = \underline{\quad\quad\quad} \quad 36 \times 422 = \underline{\quad\quad\quad} \quad 50 \times 484 = \underline{\quad\quad\quad}$$



$$76 \times 693 = \underline{\quad\quad\quad} \quad 96 \times 817 = \underline{\quad\quad\quad} \quad 40 \times 357 = \underline{\quad\quad\quad} \quad 29 \times 272 = \underline{\quad\quad\quad}$$



$$84 \times 947 = \underline{\quad\quad\quad} \quad 84 \times 417 = \underline{\quad\quad\quad} \quad 21 \times 469 = \underline{\quad\quad\quad} \quad 33 \times 881 = \underline{\quad\quad\quad}$$