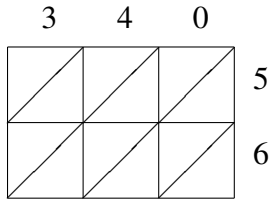
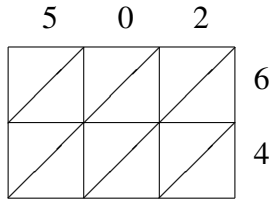


# Lattice Multiplication (G)

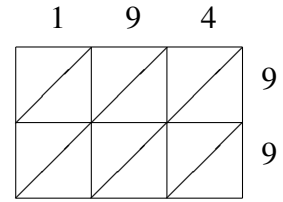
Use lattice multiplication to find each product.



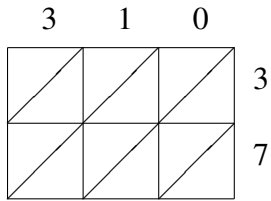
$340 \times 56 = \underline{\hspace{2cm}}$



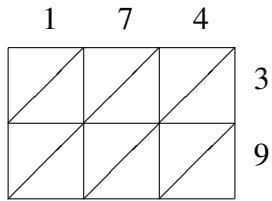
$502 \times 64 = \underline{\hspace{2cm}}$



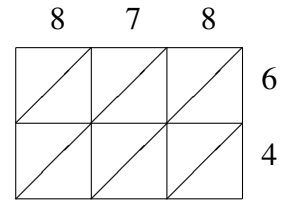
$194 \times 99 = \underline{\hspace{2cm}}$



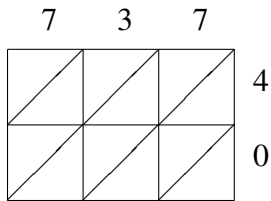
$310 \times 37 = \underline{\hspace{2cm}}$



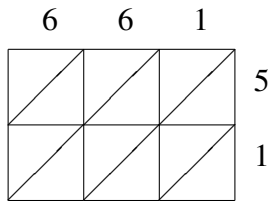
$174 \times 39 = \underline{\hspace{2cm}}$



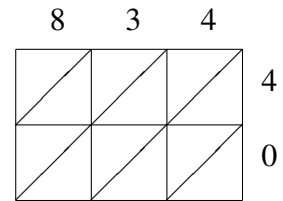
$878 \times 64 = \underline{\hspace{2cm}}$



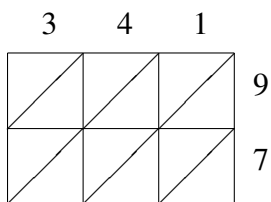
$737 \times 40 = \underline{\hspace{2cm}}$



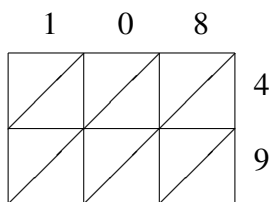
$661 \times 51 = \underline{\hspace{2cm}}$



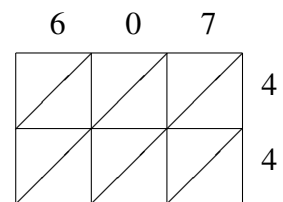
$834 \times 40 = \underline{\hspace{2cm}}$



$341 \times 97 = \underline{\hspace{2cm}}$



$108 \times 49 = \underline{\hspace{2cm}}$



$607 \times 44 = \underline{\hspace{2cm}}$