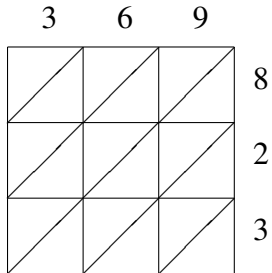
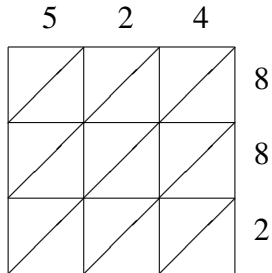


Lattice Multiplication (D)

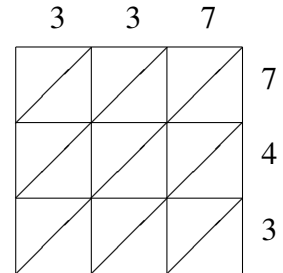
Use lattice multiplication to find each product.



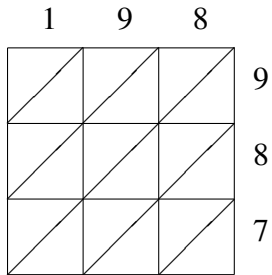
$369 \times 823 = \underline{\hspace{2cm}}$



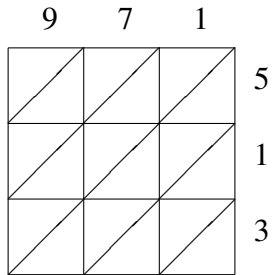
$524 \times 882 = \underline{\hspace{2cm}}$



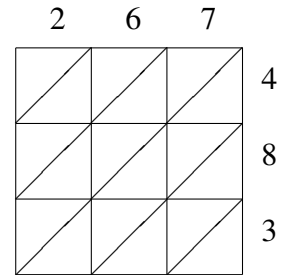
$337 \times 743 = \underline{\hspace{2cm}}$



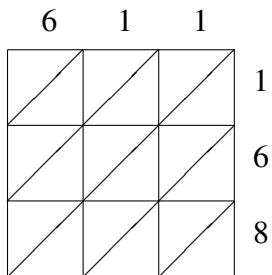
$198 \times 987 = \underline{\hspace{2cm}}$



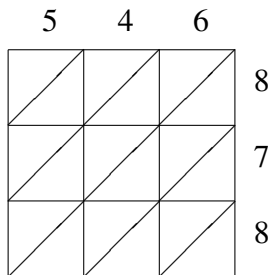
$971 \times 513 = \underline{\hspace{2cm}}$



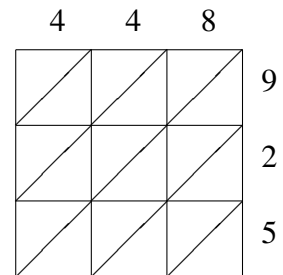
$267 \times 483 = \underline{\hspace{2cm}}$



$611 \times 168 = \underline{\hspace{2cm}}$



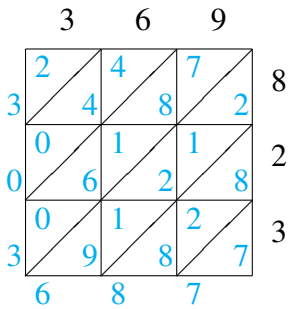
$546 \times 878 = \underline{\hspace{2cm}}$



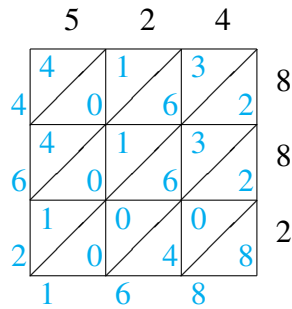
$448 \times 925 = \underline{\hspace{2cm}}$

Lattice Multiplication (D) Answers

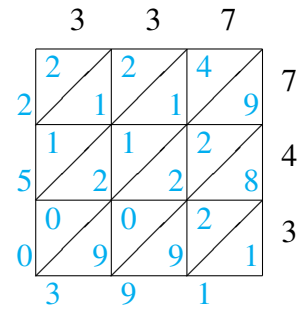
Use lattice multiplication to find each product.



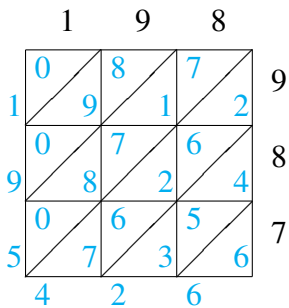
$$369 \times 823 = 303,687$$



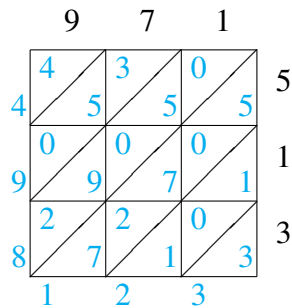
$$524 \times 882 = 462,168$$



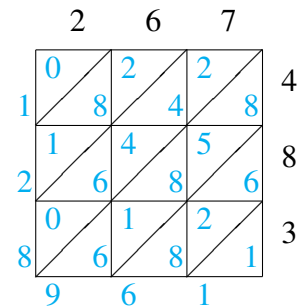
$$337 \times 743 = 250,391$$



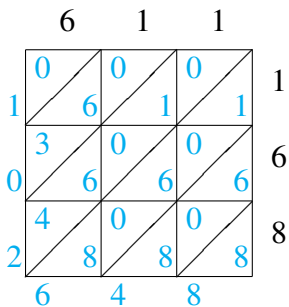
$$198 \times 987 = 195,426$$



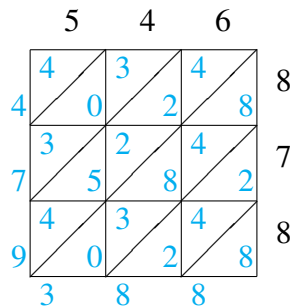
$$971 \times 513 = 498,123$$



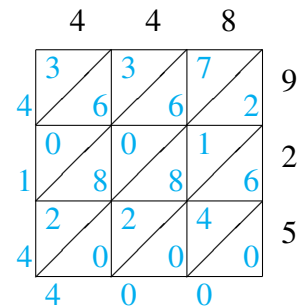
$$267 \times 483 = 128,961$$



$$611 \times 168 = 102,648$$



$$546 \times 878 = 479,388$$



$$448 \times 925 = 414,400$$