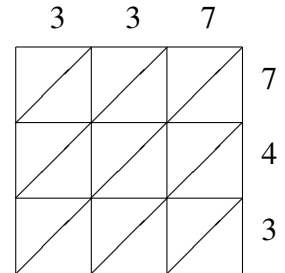
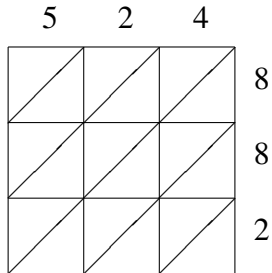
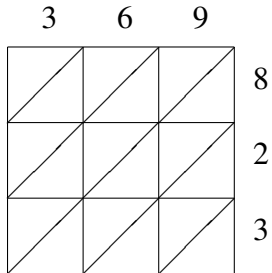


Lattice Multiplication (D)

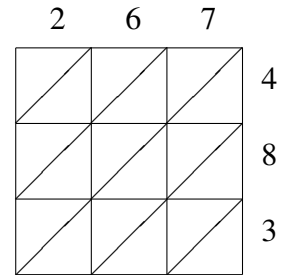
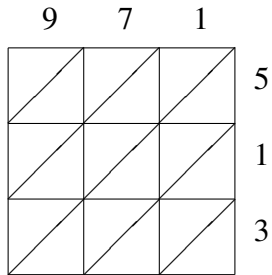
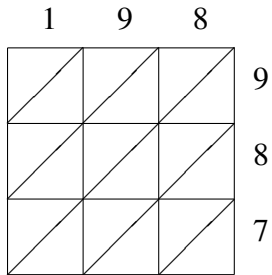
Use lattice multiplication to find each product.



$369 \times 823 = \underline{\hspace{2cm}}$

$524 \times 882 = \underline{\hspace{2cm}}$

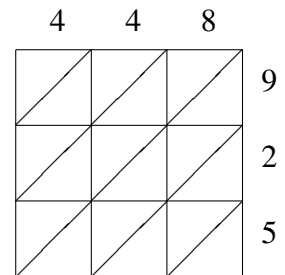
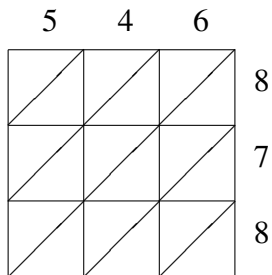
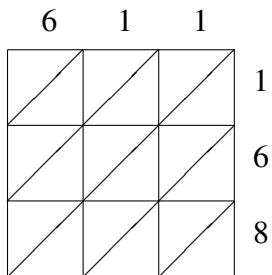
$337 \times 743 = \underline{\hspace{2cm}}$



$198 \times 987 = \underline{\hspace{2cm}}$

$971 \times 513 = \underline{\hspace{2cm}}$

$267 \times 483 = \underline{\hspace{2cm}}$



$611 \times 168 = \underline{\hspace{2cm}}$

$546 \times 878 = \underline{\hspace{2cm}}$

$448 \times 925 = \underline{\hspace{2cm}}$