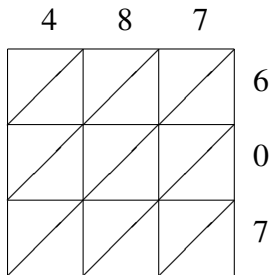
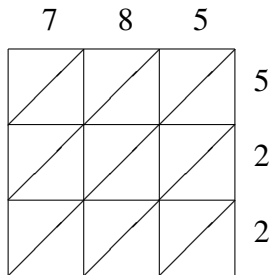


# Lattice Multiplication (H)

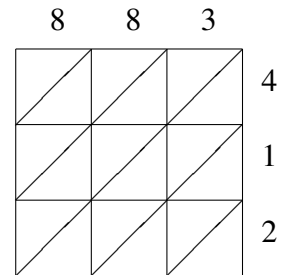
Use lattice multiplication to find each product.



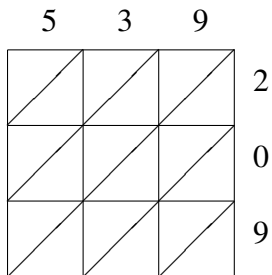
$487 \times 607 = \underline{\hspace{2cm}}$



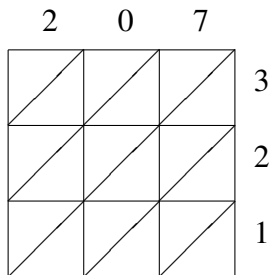
$785 \times 522 = \underline{\hspace{2cm}}$



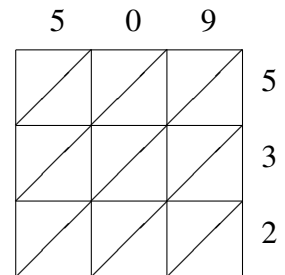
$883 \times 412 = \underline{\hspace{2cm}}$



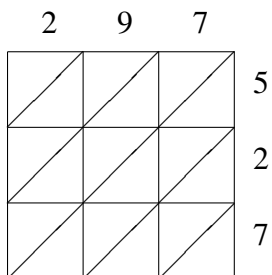
$539 \times 209 = \underline{\hspace{2cm}}$



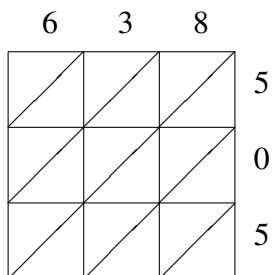
$207 \times 321 = \underline{\hspace{2cm}}$



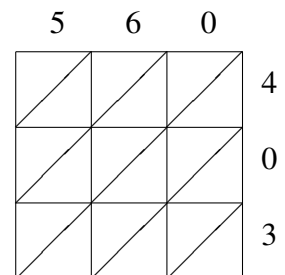
$509 \times 532 = \underline{\hspace{2cm}}$



$297 \times 527 = \underline{\hspace{2cm}}$



$638 \times 505 = \underline{\hspace{2cm}}$



$560 \times 403 = \underline{\hspace{2cm}}$