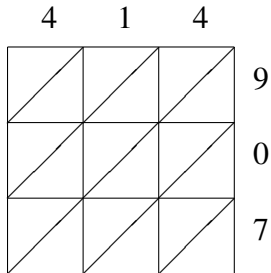
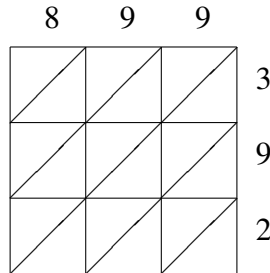


# Lattice Multiplication (I)

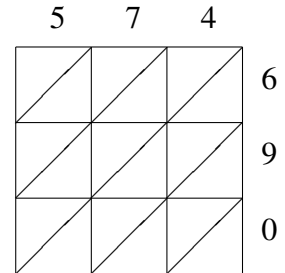
Use lattice multiplication to find each product.



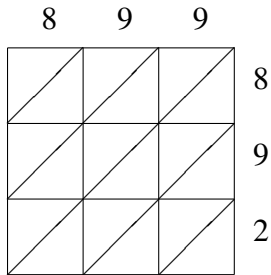
$414 \times 907 = \underline{\hspace{2cm}}$



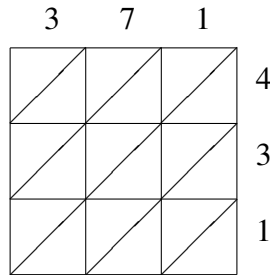
$899 \times 392 = \underline{\hspace{2cm}}$



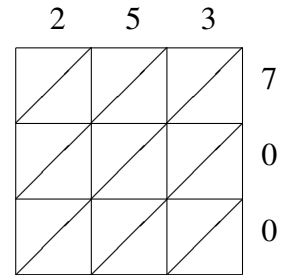
$574 \times 690 = \underline{\hspace{2cm}}$



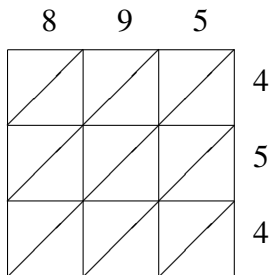
$899 \times 892 = \underline{\hspace{2cm}}$



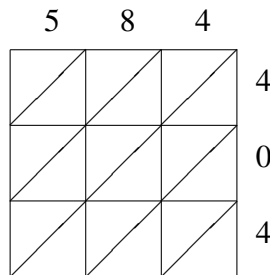
$371 \times 431 = \underline{\hspace{2cm}}$



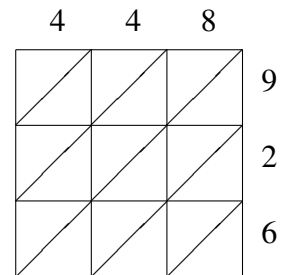
$253 \times 700 = \underline{\hspace{2cm}}$



$895 \times 454 = \underline{\hspace{2cm}}$



$584 \times 404 = \underline{\hspace{2cm}}$



$448 \times 926 = \underline{\hspace{2cm}}$