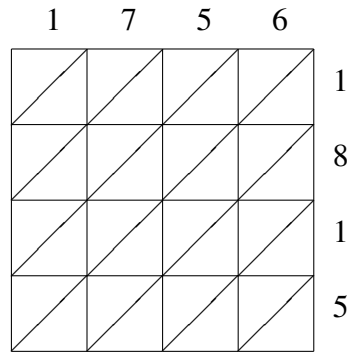
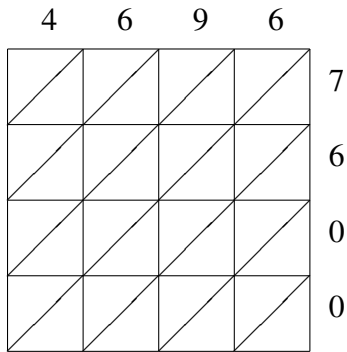


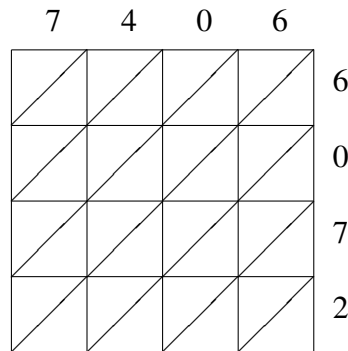
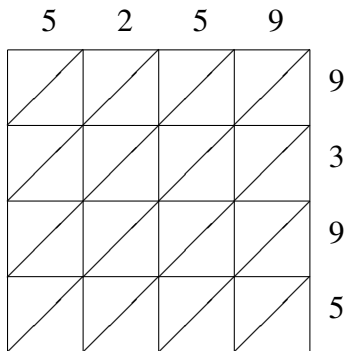
# Lattice Multiplication (D)

Use lattice multiplication to find each product.



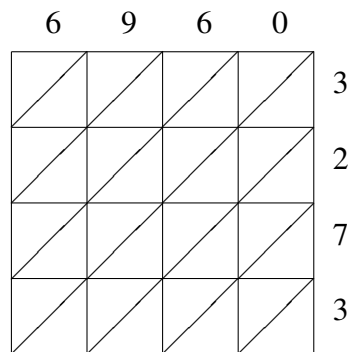
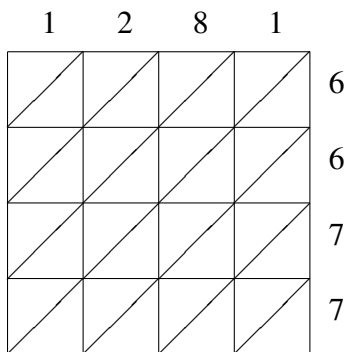
$4696 \times 7600 = \underline{\hspace{2cm}}$

$1756 \times 1815 = \underline{\hspace{2cm}}$



$5259 \times 9395 = \underline{\hspace{2cm}}$

$7406 \times 6072 = \underline{\hspace{2cm}}$



$1281 \times 6677 = \underline{\hspace{2cm}}$

$6960 \times 3273 = \underline{\hspace{2cm}}$