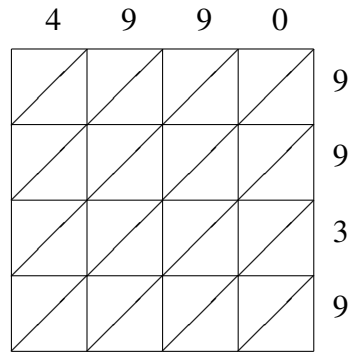
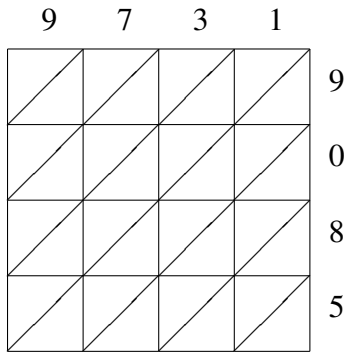


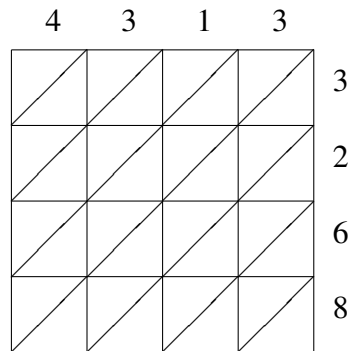
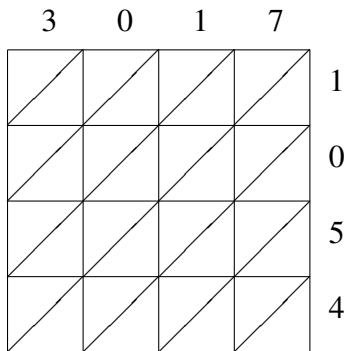
Lattice Multiplication (F)

Use lattice multiplication to find each product.



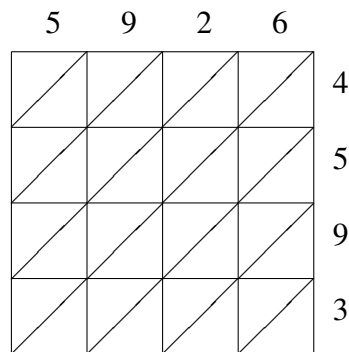
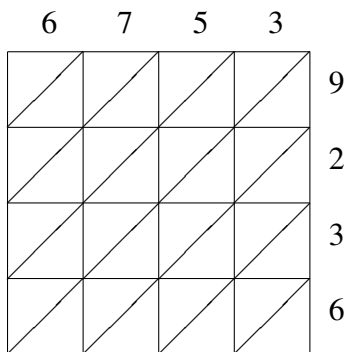
$9731 \times 9085 = \underline{\hspace{2cm}}$

$4990 \times 9939 = \underline{\hspace{2cm}}$



$3017 \times 1054 = \underline{\hspace{2cm}}$

$4313 \times 3268 = \underline{\hspace{2cm}}$

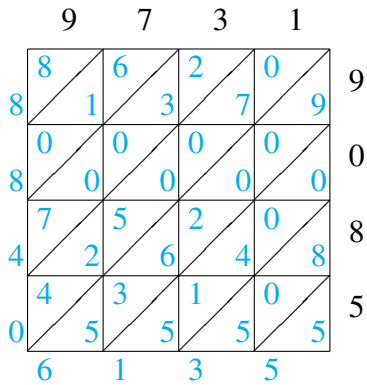


$6753 \times 9236 = \underline{\hspace{2cm}}$

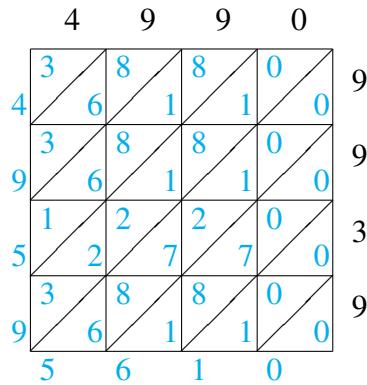
$5926 \times 4593 = \underline{\hspace{2cm}}$

Lattice Multiplication (F) Answers

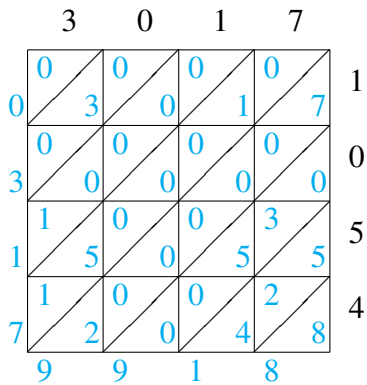
Use lattice multiplication to find each product.



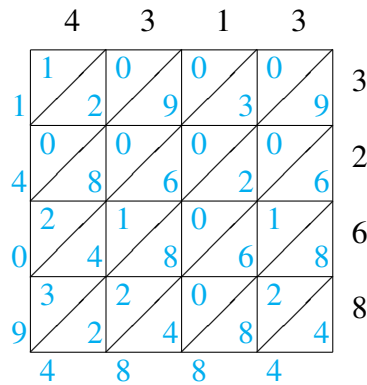
$$9731 \times 9085 = 88,406,135$$



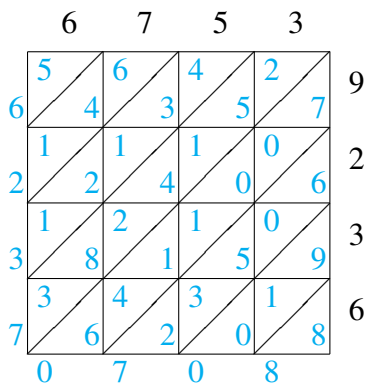
$$4990 \times 9939 = 49,595,610$$



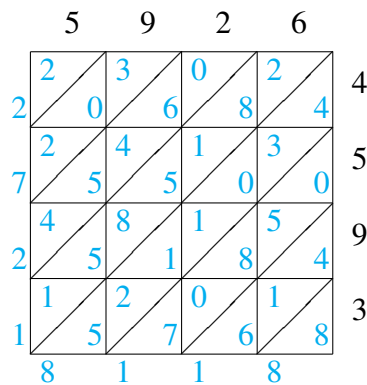
$$3017 \times 1054 = 3,179,918$$



$$4313 \times 3268 = 14,094,884$$



$$6753 \times 9236 = 62,370,708$$



$$5926 \times 4593 = 27,218,118$$