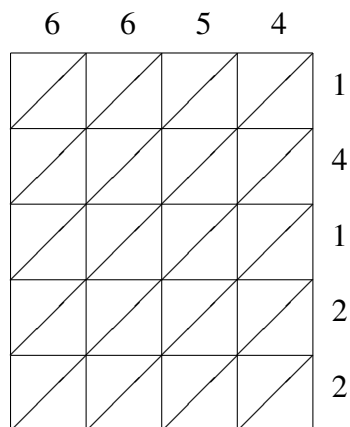
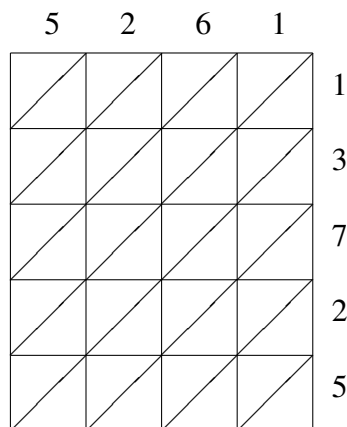


# Lattice Multiplication (A)

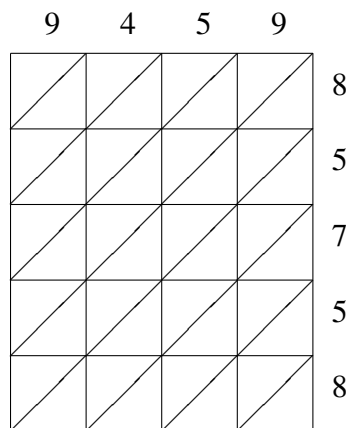
Use lattice multiplication to find each product.



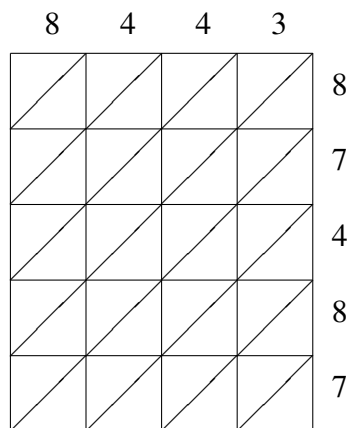
$$6654 \times 14122 = \underline{\hspace{2cm}}$$



$$5261 \times 13725 = \underline{\hspace{2cm}}$$



$$9459 \times 85758 = \underline{\hspace{2cm}}$$



$$8443 \times 87487 = \underline{\hspace{2cm}}$$