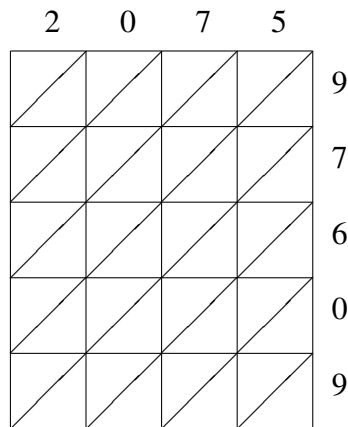
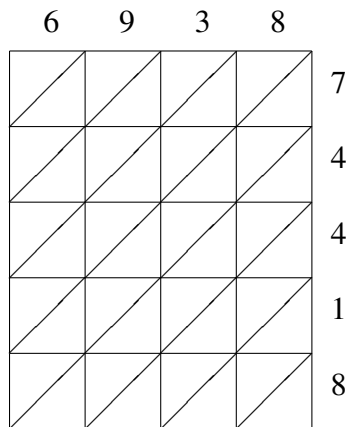


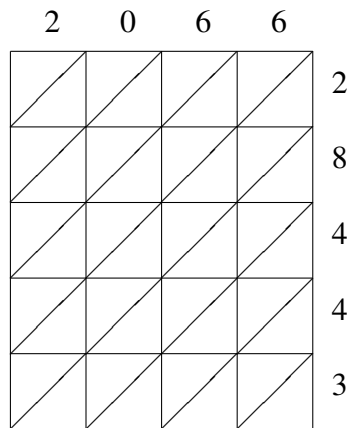
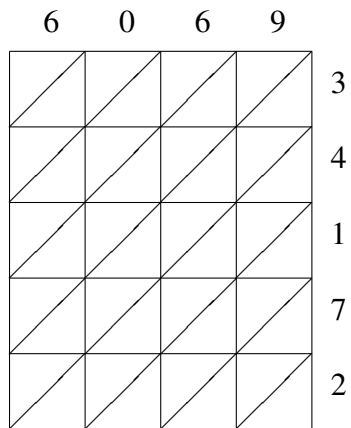
# Lattice Multiplication (B)

Use lattice multiplication to find each product.



$6938 \times 74418 = \underline{\hspace{2cm}}$

$2075 \times 97609 = \underline{\hspace{2cm}}$



$6069 \times 34172 = \underline{\hspace{2cm}}$

$2066 \times 28443 = \underline{\hspace{2cm}}$