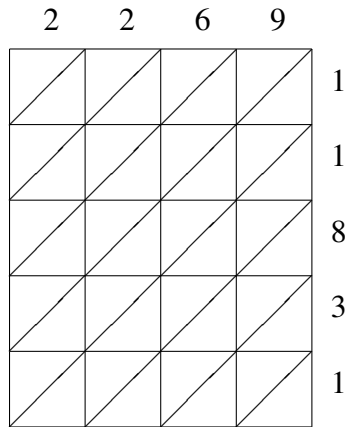
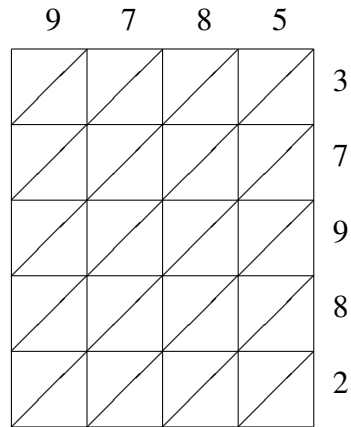


# Lattice Multiplication (F)

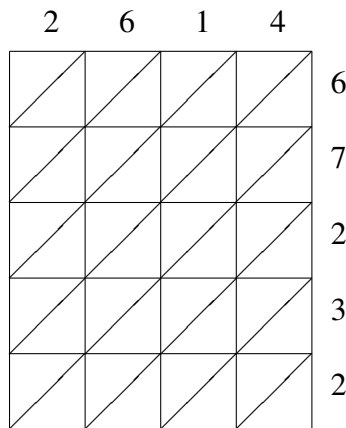
Use lattice multiplication to find each product.



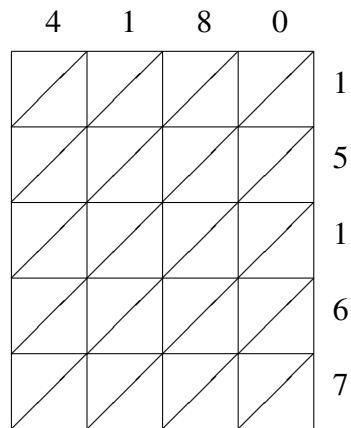
$$2269 \times 11831 = \underline{\hspace{2cm}}$$



$$9785 \times 37982 = \underline{\hspace{2cm}}$$



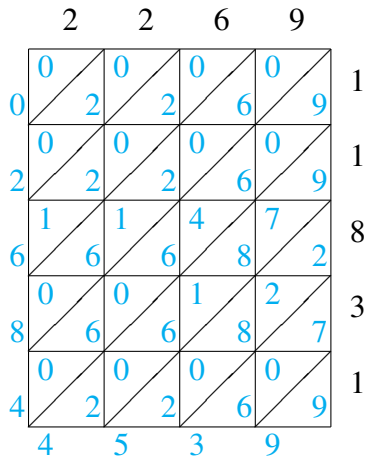
$$2614 \times 67232 = \underline{\hspace{2cm}}$$



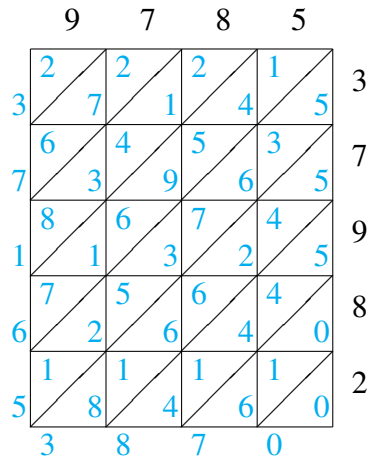
$$4180 \times 15167 = \underline{\hspace{2cm}}$$

# Lattice Multiplication (F) Answers

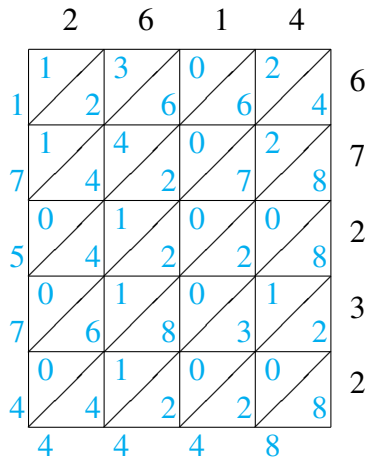
Use lattice multiplication to find each product.



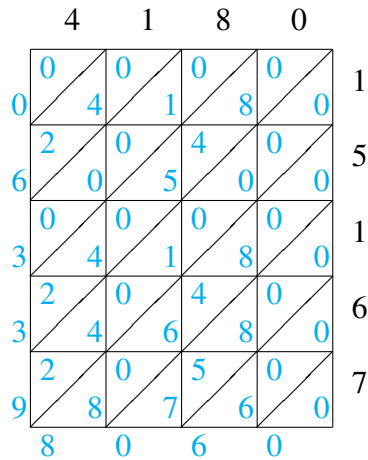
$$2269 \times 11831 = 26,844,539$$



$$9785 \times 37982 = 371,653,870$$



$$2614 \times 67232 = 175,744,448$$



$$4180 \times 15167 = 63,398,060$$