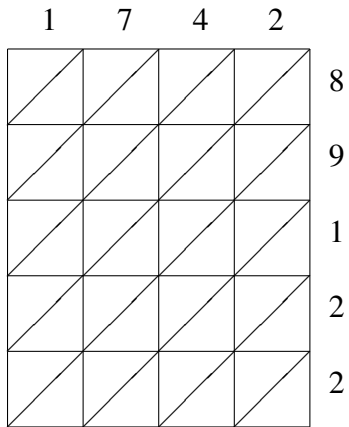
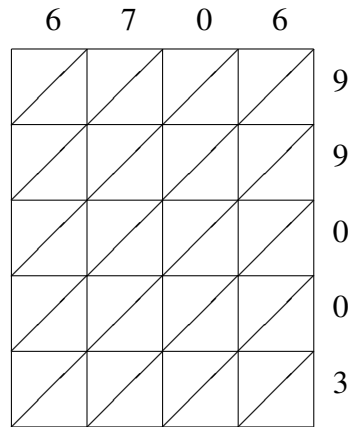


# Lattice Multiplication (H)

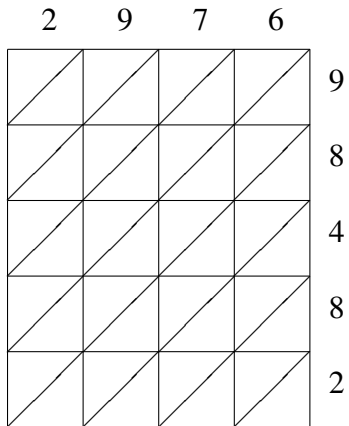
Use lattice multiplication to find each product.



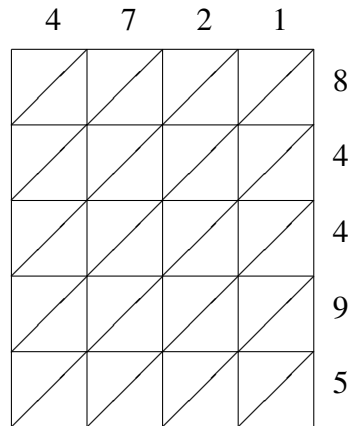
$$1742 \times 89122 = \underline{\hspace{2cm}}$$



$$6706 \times 99003 = \underline{\hspace{2cm}}$$



$$2976 \times 98482 = \underline{\hspace{2cm}}$$



$$4721 \times 84495 = \underline{\hspace{2cm}}$$