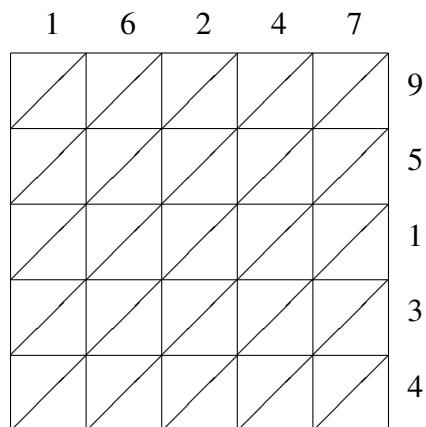
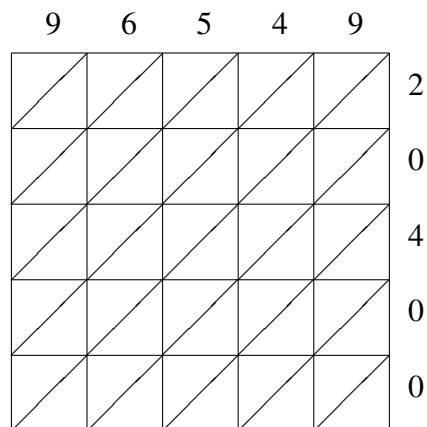


Lattice Multiplication (F)

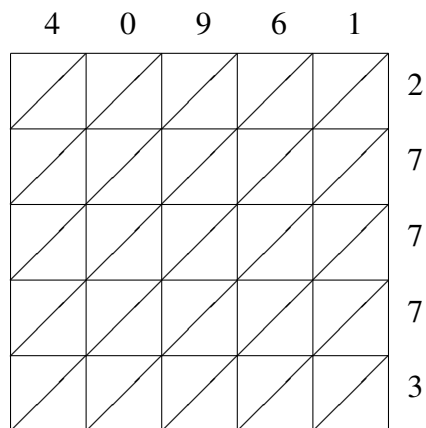
Use lattice multiplication to find each product.



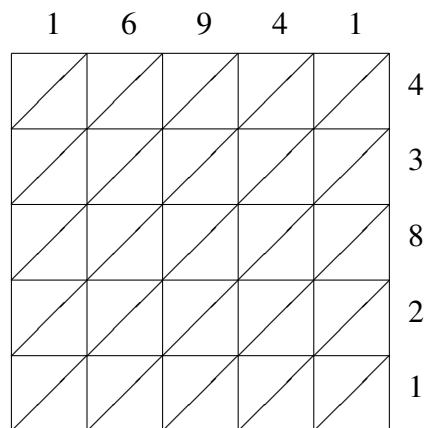
$$16247 \times 95134 = \underline{\hspace{2cm}}$$



$$96549 \times 20400 = \underline{\hspace{2cm}}$$



$$40961 \times 27773 = \underline{\hspace{2cm}}$$



$$16941 \times 43821 = \underline{\hspace{2cm}}$$