






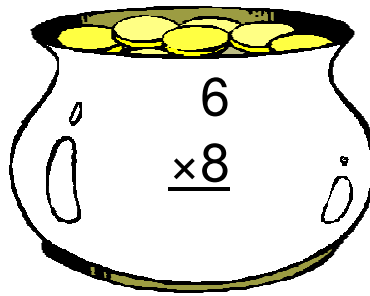






Pot of Gold Multiplication (D)

Instructions: Can you find Lucky's real pot of gold? Maybe he has more than one hidden. Circle all of the pots with a product of 18.



Pot of Gold Multiplication (D) Answers

Instructions: Can you find Lucky's real pot of gold? Maybe he has more than one hidden. Circle all of the pots with a product of 18.

$$\begin{array}{r} 7 \\ \times 7 \\ \hline 49 \end{array}$$

$$\begin{array}{r} 6 \\ \times 3 \\ \hline 18 \end{array}$$

$$\begin{array}{r} 8 \\ \times 6 \\ \hline 48 \end{array}$$

Lucky's Pot

$$\begin{array}{r} 3 \\ \times 5 \\ \hline 15 \end{array}$$

$$\begin{array}{r} 6 \\ \times 8 \\ \hline 48 \end{array}$$

$$\begin{array}{r} 6 \\ \times 6 \\ \hline 36 \end{array}$$

$$\begin{array}{r} 4 \\ \times 9 \\ \hline 36 \end{array}$$

$$\begin{array}{r} 8 \\ \times 9 \\ \hline 72 \end{array}$$

$$\begin{array}{r} 4 \\ \times 4 \\ \hline 16 \end{array}$$

$$\begin{array}{r} 3 \\ \times 4 \\ \hline 12 \end{array}$$

$$\begin{array}{r} 3 \\ \times 6 \\ \hline 18 \end{array}$$

$$\begin{array}{r} 4 \\ \times 3 \\ \hline 12 \end{array}$$

Lucky's Pot