













# Pot of Gold Multiplication (E)

Instructions: Can you find Lucky's real pot of gold? Maybe he has more than one hidden. Circle all of the pots with a product of 35.



# Pot of Gold Multiplication (E) Answers

Instructions: Can you find Lucky's real pot of gold? Maybe he has more than one hidden. Circle all of the pots with a product of 35.

$$\begin{array}{r} 6 \\ \times 6 \\ \hline 36 \end{array}$$

$$\begin{array}{r} 7 \\ \times 5 \\ \hline 35 \end{array}$$

$$\begin{array}{r} 7 \\ \times 9 \\ \hline 63 \end{array}$$

Lucky's Pot

$$\begin{array}{r} 8 \\ \times 5 \\ \hline 40 \end{array}$$

$$\begin{array}{r} 8 \\ \times 3 \\ \hline 24 \end{array}$$

$$\begin{array}{r} 6 \\ \times 6 \\ \hline 36 \end{array}$$

$$\begin{array}{r} 3 \\ \times 9 \\ \hline 27 \end{array}$$

$$\begin{array}{r} 4 \\ \times 7 \\ \hline 28 \end{array}$$

$$\begin{array}{r} 3 \\ \times 5 \\ \hline 15 \end{array}$$

$$\begin{array}{r} 9 \\ \times 8 \\ \hline 72 \end{array}$$

$$\begin{array}{r} 7 \\ \times 9 \\ \hline 63 \end{array}$$

$$\begin{array}{r} 6 \\ \times 5 \\ \hline 30 \end{array}$$