













Pot of Gold Multiplication (F)

Instructions: Can you find Lucky's real pot of gold? Maybe he has more than one hidden. Circle all of the pots with a product of 72.



Pot of Gold Multiplication (F) Answers

Instructions: Can you find Lucky's real pot of gold? Maybe he has more than one hidden. Circle all of the pots with a product of 72.

$$\begin{array}{r} 4 \\ \times 8 \\ \hline 32 \end{array}$$

$$\begin{array}{r} 5 \\ \times 9 \\ \hline 45 \end{array}$$

$$\begin{array}{r} 6 \\ \times 3 \\ \hline 18 \end{array}$$

$$\begin{array}{r} 8 \\ \times 9 \\ \hline 72 \end{array}$$

$$\begin{array}{r} 9 \\ \times 5 \\ \hline 45 \end{array}$$

$$\begin{array}{r} 6 \\ \times 5 \\ \hline 30 \end{array}$$

Lucky's Pot

$$\begin{array}{r} 4 \\ \times 5 \\ \hline 20 \end{array}$$

$$\begin{array}{r} 9 \\ \times 3 \\ \hline 27 \end{array}$$

$$\begin{array}{r} 5 \\ \times 7 \\ \hline 35 \end{array}$$

$$\begin{array}{r} 7 \\ \times 8 \\ \hline 56 \end{array}$$

$$\begin{array}{r} 6 \\ \times 4 \\ \hline 24 \end{array}$$

$$\begin{array}{r} 9 \\ \times 8 \\ \hline 72 \end{array}$$

Lucky's Pot